

29/01/2025

Morning



Aakash

Medical | IIT-JEE | Foundations

Corporate Office : AESL, 3rd Floor, Incuspaze Campus-2, Plot-13, Sector-18, Udyog Vihar,
Gurugram, Haryana-122018

Answers & Solutions

Time : 3 hrs.

for

M.M. : 300

JEE (Main)-2025 Phase-1 [Computer Based Test (CBT) mode]

(Mathematics, Physics and Chemistry)

IMPORTANT INSTRUCTIONS:

- (1) The test is of **3 hours** duration.
- (2) This test paper consists of 75 questions. Each subject (MPC) has 25 questions. The maximum marks are 300.
- (3) This question paper contains **Three** Parts. **Part-A** is Physics, **Part-B** is Chemistry and **Part-C** is **Mathematics**. Each part has only two sections: **Section-A** and **Section-B**.
- (4) **Section - A** : Attempt all questions.
- (5) **Section - B** : Attempt all questions.
- (6) **Section - A (01 – 20)** contains 20 multiple choice questions which have **only one correct answer**. Each question carries **+4 marks** for correct answer and **–1 mark** for wrong answer.
- (7) **Section - B (21 – 25)** contains 5 **Numerical value** based questions. The answer to each question should be rounded off to the **nearest integer**. Each question carries **+4 marks** for correct answer and **–1 mark** for wrong answer.

 Delivering Champions Consistently


Medical | IIT-JEE | Foundations

JEE (Advanced) 2024

JEE (Main) 2024



MATHEMATICS

SECTION - A

Multiple Choice Questions: This section contains 20 multiple choice questions. Each question has 4 choices (1), (2), (3) and (4), out of which **ONLY ONE** is correct.

Choose the correct answer:

1. Define a relation R on the interval $\left[0, \frac{\pi}{2}\right]$ by $x R y$ if and only if $\sec^2 x - \tan^2 y = 1$. Then R is:
- (1) both reflexive and transitive but not symmetric
 - (2) an equivalence relation
 - (3) reflexive but neither symmetric nor transitive
 - (4) both reflexive and symmetric but not transitive

Answer (2)

Sol. $x R y : \sec^2 x - \tan^2 y = 1$

Check reflexive:

$$x R x = \sec^2 x - \tan^2 x = 1$$

$$\forall x \in \left[0, \frac{\pi}{2}\right]$$

Check symmetric

$$x R y \Rightarrow y R x$$

$$\sec^2 x - \tan^2 y = 1$$

$$= \sec^2 y - \tan^2 x = (1 + \tan^2 y) - (\sec^2 x - 1)$$

$$= 2 - (\sec^2 x - \tan^2 y)$$

$$= 2 - 1 = 1$$

$$\Rightarrow y R x$$

Check transitive

$$x R y \text{ and } y R z$$

$$\Rightarrow \sec^2 x - \tan^2 y = 1$$

$$\sec^2 y - \tan^2 z = 1$$

$$\text{Add } \Rightarrow \sec^2 x - \tan^2 z + (\sec^2 y - \tan^2 y) = 2$$

$$\Rightarrow \sec^2 x - \tan^2 z + 1 = 2 \Rightarrow x R z$$

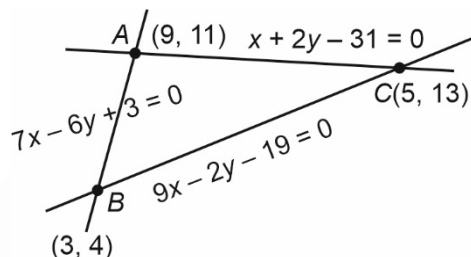
$$\Rightarrow R \text{ is an equivalence relation.}$$

2. Let ABC be a triangle formed by the lines $7x - 6y + 3 = 0$, $x + 2y - 31 = 0$ and $9x - 2y - 19 = 0$. Let the point (h, k) be the image of the centroid of $\triangle ABC$ in the line $3x + 6y - 53 = 0$. Then $h^2 + k^2 + hk$ is equal to:

- (1) 40
- (2) 36
- (3) 47
- (4) 37

Answer (4)

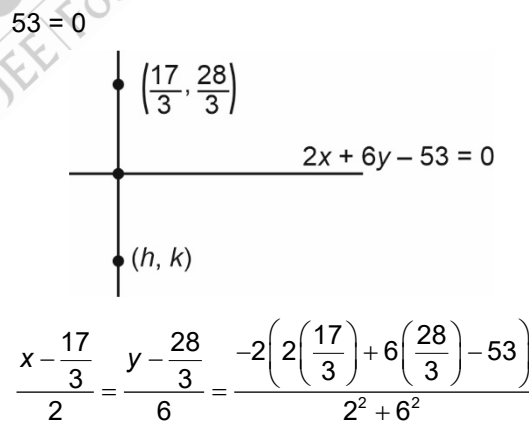
Sol.



Points of intersections are $(9, 11)$, $(3, 4)$, $(5, 13)$

$$\text{Centroid of } \triangle ABC = \left(\frac{17}{3}, \frac{28}{3}\right)$$

Since during image of $\triangle ABC$ about line will reflect the whole triangle including centroid, reflected centroid will be image of $\left(\frac{17}{3}, \frac{28}{3}\right)$ about $2x + 6y - 53 = 0$



$$\frac{x - \frac{17}{3}}{2} = \frac{y - \frac{28}{3}}{6} = \frac{-2\left(2\left(\frac{17}{3}\right) + 6\left(\frac{28}{3}\right) - 53\right)}{2^2 + 6^2}$$

$$\Rightarrow h = 3, k = 4$$

$$\Rightarrow h^2 + k^2 + hk = (h + k)^2 - hk$$

$$= 49 - 12 = 37$$

Delivering Champions Consistently

JEE (Advanced) 2024

AIR 25 Rishj Shekher Shukla 2 Year Classroom	AIR 67 Krishna Sai Shishir 2 Year Classroom	AIR 78 Abhishek Jain 2 Year Classroom	AIR 93 Harsh Aggarwal 2 Year Classroom	AIR 95 Ujjwal Singh 2 Year Classroom	AIR 98 Rashit Aggarwal 2 Year Classroom
---	--	--	---	---	--

JEE (Main) 2024

Karnataka Topper AIR 1 Sanyal Jais 2 Year Classroom	Telangana Topper AIR 15 M Sai Divya Teja Reddy 2 Year Classroom	Telangana Topper AIR 19 Rishi Shekher Shukla 2 Year Classroom
--	--	--

3. Let $\vec{a} = 2\hat{i} - \hat{j} + 3\hat{k}$, $\vec{b} = 3\hat{i} - 5\hat{j} + \hat{k}$ and \vec{c} be a vector such that $\vec{a} \times \vec{c} = \vec{c} \times \vec{b}$ and $(\vec{a} + \vec{c}) \cdot (\vec{b} + \vec{c}) = 168$. Then the maximum value of $|\vec{c}|^2$ is

- (1) 308 (2) 462
(3) 154 (4) 77

Answer (1)

Sol. $\vec{a} \times \vec{c} = \vec{c} \times \vec{b} = -(\vec{b} \times \vec{c})$

$$\Rightarrow (\vec{a} \times \vec{c} + \vec{b} \times \vec{c}) = (\vec{a} + \vec{b}) \times \vec{c} = 0$$

$$\Rightarrow \vec{c} \text{ is parallel to } \vec{a} + \vec{b}.$$

$$\vec{c} = \lambda(5\hat{i} + (-6)\hat{j} + 4\hat{k}) \Rightarrow |\vec{c}|^2 = \lambda^2(\pi)$$

$$(\vec{a} + \vec{c}) \cdot (\vec{b} + \vec{c}) = \vec{a} \cdot \vec{b} + |\vec{c}|^2 + \vec{c} \cdot (\vec{a} + \vec{b})$$

$$= (6 + 5 + 3) + |\vec{c}|^2 + \lambda(25 + 36 + 16) = 168$$

$$\Rightarrow |\vec{c}|^2 + \lambda(77) = 154$$

$$\Rightarrow 77\lambda^2 + 77\lambda - 152 = 0$$

$$\Rightarrow \lambda^2 + \lambda - 2 = 0$$

$$\Rightarrow (\lambda + 2)(\lambda - 1) = 0$$

$$|\vec{c}|_{\max}^2 = (-2)^2(77) = 308$$

4. Let $y = y(x)$ be the solution of the differential equation $\cos x (\log_e(\cos x))^2 dy + (\sin x - 3y \sin x \log_e(\cos x)) dx = 0$, $x \in \left(0, \frac{\pi}{2}\right)$. If

$$y\left(\frac{\pi}{4}\right) = \frac{-1}{\log_e 2}, \text{ then } y\left(\frac{\pi}{6}\right) \text{ is equal to:}$$

- (1) $-\frac{1}{\log_e(4)}$ (2) $\frac{1}{\log_e(3) - \log_e(4)}$
(3) $\frac{1}{\log_e(4) - \log_e(3)}$ (4) $\frac{2}{\log_e(3) - \log_e(4)}$

Answer (2)

Sol. $\frac{dy}{dx} - \frac{3 \sin x}{\cos x \ln \cos x} y = -\frac{\sin x}{\cos x (\ln \cos x)^2}$

$$\text{I.F.} = e^{-\int \frac{3 \tan x}{\ln \cos x} dx}$$

$$\text{Let } \ln \cos x = t$$

$$-\tan x dx = dt$$

$$e^{3 \int \frac{dt}{t}} = e^{3 \ln t} = t^3 = (\ln \cos x)^3$$

\therefore Solution will be

$$y(\ln \cos x)^3 = -\int (\tan x)(\ln \cos x) dx$$

$$y(\ln \cos x)^3 = \frac{(\ln \cos x)^2}{2} + c$$

$$\therefore y\left(\frac{\pi}{4}\right) = -\frac{1}{\ln 2}$$

$$\Rightarrow c = 0$$

$$\therefore y = \frac{1}{2(\ln \cos x)}$$

$$y\left(\frac{\pi}{6}\right) = \frac{1}{2} \times \frac{1}{\ln\left(\cos \frac{\pi}{6}\right)}$$

$$= \frac{1}{2} \left[\frac{1}{\ln\left(\frac{\sqrt{3}}{2}\right)} \right]$$

$$= \frac{1}{2} \times \frac{1}{\ln \sqrt{3} - \ln 2}$$

$$= \frac{1}{\ln 3 - \ln 4}$$

5. The value of $\lim_{n \rightarrow \infty} \left(\sum_{k=1}^n \frac{k^3 + 6k^2 + 11k + 5}{(k+3)!} \right)$ is

- (1) $\frac{7}{3}$ (2) $\frac{4}{3}$
(3) $\frac{5}{3}$ (4) 2

Answer (3)



Delivering Champions Consistently


Aakash
 Medical | IIT-JEE | Foundations

JEE (Advanced) 2024



AIR 25
Rishi Shekher Shukla
2 Year Classroom



AIR 67
Krishna Sai Shishir
2 Year Classroom



AIR 78
Abhishek Jain
2 Year Classroom



AIR 93
Hardik Aggarwal
2 Year Classroom



AIR 95
Ujjwal Singh
2 Year Classroom



AIR 98
Rashit Aggarwal
2 Year Classroom

JEE (Main) 2024



AIR 1
Sanvi Jain
2 Year Classroom

Telangana Topper



AIR 15
M Sai Divya Teja Reddy
2 Year Classroom

Telangana Topper



AIR 19
Rishi Shekher Shukla
2 Year Classroom

Sol. $\lim_{n \rightarrow \infty} \left(\sum_{k=1}^n \frac{k^3 + 6k^2 + 11k + 5}{(k+3)!} \right)$
 $\lim_{n \rightarrow \infty} \left(\sum_{k=1}^n \frac{k^3 + 6k^2 + 11k + 6 - 1}{(k+3)!} \right)$
 $\lim_{n \rightarrow \infty} \left(\sum_{k=1}^n \frac{(k+1)(k+2)(k+3) - 1}{(k+3)!} \right)$
 $\lim_{n \rightarrow \infty} \left(\sum_{k=1}^n \frac{1}{k!} - \frac{1}{(k+3)!} \right)$
 $= \left(\frac{1}{1!} + \frac{1}{2!} + \frac{1}{3!} + \dots \infty \right) - \left(\frac{1}{4!} + \frac{1}{5!} + \frac{1}{6!} + \dots \infty \right)$
 $= (e - 1) - \left(e - 1 - \frac{1}{1!} - \frac{1}{2!} - \frac{1}{3!} \right)$
 $= 1 + \frac{1}{2} + \frac{1}{6} = \frac{10}{6} = \frac{5}{3}$

6. Let P be the set of seven digit numbers with sum of their digits equal to 11. If the numbers in P are formed by using the digits 1, 2 and 3 only, then the number of elements in the set P is:

- (1) 173 (2) 161
(3) 164 (4) 158

Answer (2)

Sol. Case I: 3 2 2 1 1 1 1

$$n_1 = \frac{7!}{4!2!} = 105$$

Case II: 2 2 2 2 1 1 1

$$n_2 = \frac{7!}{4!3!} = 35$$

Case III: 3 3 1 1 1 1 1

$$n_3 = \frac{7!}{2!4!} = 21$$

$$\text{Total numbers} = 105 + 35 + 21 = 161$$

7. Let M and m respectively be the maximum and the minimum values of

$$f(x) = \begin{vmatrix} 1 + \sin^2 x & \cos^2 x & 4 \sin 4x \\ \sin^2 x & 1 + \cos^2 x & 4 \sin 4x \\ \sin^2 x & \cos^2 x & 1 + 4 \sin 4x \end{vmatrix}, x \in R$$

Then $M^4 - m^4$ is equal to

- (1) 1295 (2) 1040
(3) 1280 (4) 1215

Answer (3)

Sol. $R_1 \rightarrow R_1 - R_2, R_2 \rightarrow R_2 - R_3$

$$\begin{vmatrix} 1 & -1 & 0 \\ 0 & 1 & -1 \\ \sin^2 x & \cos^2 x & 1 + 4 \sin 4x \end{vmatrix} = f(x)$$

$C_2 \rightarrow C_1 + C_2$

$$\begin{vmatrix} 1 & 0 & 0 \\ 0 & 1 & -1 \\ \sin^2 x & 1 & 1 + 4 \sin 4x \end{vmatrix} = f(x)$$

$$f(x) = 1 + 4 \sin 4x + 1 = 2 + 4 \sin 4x$$

$$M = 6, m = -2$$

$$M^4 - m^4 = 1280$$

8. The integral $80 \int_0^{\pi/4} \left(\frac{\sin \theta + \cos \theta}{9 + 16 \sin 2\theta} \right) d\theta$ is equal to

- (1) $4 \log_e 3$ (2) $6 \log_e 4$
(3) $2 \log_e 3$ (4) $3 \log_e 4$

Answer (1)

Sol. $I = \int_0^{\pi/4} \left(\frac{\sin \theta + \cos \theta}{9 - 16 \sin 2\theta} \right) d\theta$

$$\text{Take } \sin \theta - \cos \theta = t$$

$$(\cos \theta + \sin \theta) d\theta = dt$$

$$(\sin \theta - \cos \theta)^2 = t^2$$

$$\Rightarrow \sin 2\theta = 1 - t^2$$

$$\theta = 0 \rightarrow t = -1$$

$$\theta = \frac{\pi}{4} \rightarrow t = 0$$

$$I = \int_{-1}^0 \frac{dt}{9 + 16(1 - t^2)}$$

$$= \frac{1}{16} \int_{-1}^0 \frac{dt}{\frac{25}{16} - t^2}$$

$$= \frac{1}{4} \left[\frac{1}{10} \log \left| \frac{5 + 4t}{5 - 4t} \right| \right]_{-1}^0$$

$$= \frac{1}{40} [0 + \log_e 9]$$

$$I = \frac{\log_e 9}{40}$$

$$80I = 2 \log_e 9$$

$$80I = 4 \log_e 3$$



Delivering Champions Consistently

JEE (Advanced) 2024


AIR 25
 Rishi Shekher Shukla
 2 Year Classroom


AIR 67
 Krishna Sai Shishir
 2 Year Classroom


AIR 78
 Abhishek Jain
 2 Year Classroom


AIR 93
 Harsh Aggarwal
 2 Year Classroom


AIR 95
 Ujjwal Singh
 2 Year Classroom


AIR 98
 Rishit Aggarwal
 2 Year Classroom

JEE (Main) 2024


AIR 1
 Sanvi Jain
 2 Year Classroom


AIR 15
 M Sai Divya Teja Reddy
 2 Year Classroom

AIR 19
 Rishi Shekher Shukla
 2 Year Classroom

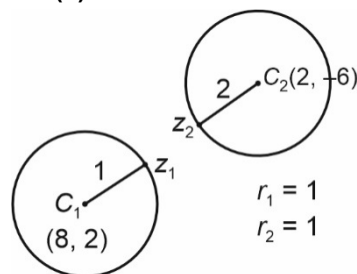
9. Let $|z_1 - 8 - 2i| \leq 1$ and $|z_2 - 2 + 6i| \leq 2$, $z_1, z_2 \in \mathbb{C}$.

Then the minimum value of $|z_1 - z_2|$ is

- (1) 13 (2) 10
(3) 7 (4) 3

Answer (3)

Sol.



$$\begin{aligned} |z_1 - z_2| &= C_1C_2 - (r_1 + r_2) \\ &= \sqrt{6^2 + 8^2} - (1 + 2) \\ &= 10 - 3 = 7 \end{aligned}$$

10. Let $A = [a_{ij}] = \begin{bmatrix} \log_5 128 & \log_4 5 \\ \log_5 8 & \log_4 25 \end{bmatrix}$.

If A_{ij} is the cofactor of a_{ij} , $C_{ij} = \sum_{k=1}^2 a_{ik} A_{jk}$, $1 \leq i, j \leq 2$

and $C = [C_{ij}]$, then $8|C|$ is equal to

- (1) 222 (2) 242
(3) 288 (4) 262

Answer (2)

Sol. $[a_{ij}] = \begin{bmatrix} 7\log_5 2 & \frac{1}{2}\log_2 5 \\ 3\log_5 2 & \log_2 5 \end{bmatrix}$

$$[A_{ij}] = \begin{bmatrix} \log_2 5 & -3\log_5 2 \\ -\frac{1}{2}\log_2 5 & 7\log_5 2 \end{bmatrix}$$

$$C_{ij} = \sum_{k=1}^2 a_{ik} A_{jk}, 1 \leq i, j \leq 2$$

$$C = \begin{bmatrix} \frac{11}{2} & 0 \\ 0 & \frac{11}{2} \end{bmatrix}$$

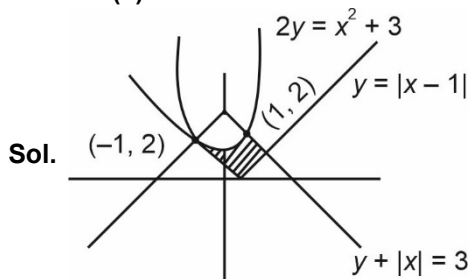
$$8|C| = \frac{121}{4} \cdot 8 = 242$$

11. Let the area of the region $\{(x, y) : 2y \leq x^2 + 3, y + |x| \leq 3, y \geq |x - 1|\}$ be A .

Then $6A$ is equal to

- (1) 18 (2) 12
(3) 16 (4) 14

Answer (4)



Sol.

$$\begin{aligned} &\int_{-1}^1 \left(\frac{x^2 + 3}{2} + (x - 1) \right) dx + \int_1^2 ((3 - x) - (x - 1)) dx \\ &\Rightarrow \left[\frac{x^3}{6} + \frac{3x}{2} + \frac{x^2}{2} - x \right]_{-1}^1 + \left[3x - \frac{x^2}{2} - \frac{x^2}{2} + x \right]_1^2 \end{aligned}$$

$$A = \frac{7}{3} \Rightarrow 6A = 14$$

12. Let $L_1 : \frac{x-1}{1} = \frac{y-2}{-1} = \frac{z-1}{2}$ and

$$L_2 : \frac{x+1}{-1} = \frac{y-2}{2} = \frac{z}{1} \text{ be two lines.}$$

Let L_3 be a line passing through the point (α, β, γ) and be perpendicular to both L_1 and L_2 . If L_3 intersects L_1 , then $|5\alpha - 11\beta - 8\gamma|$ equals

- (1) 18 (2) 25
(3) 16 (4) 20

Answer (2)

Sol. $\frac{x-\alpha}{a} = \frac{y-\beta}{b} = \frac{z-\gamma}{c} : L_3$

$$(a\hat{i} + b\hat{j} + c\hat{k}) \parallel (\hat{i} - \hat{j} + 2\hat{k}) \times (-\hat{i} + 2\hat{j} + \hat{k})$$

$$(a, b, c) \equiv (5, 3, -1)$$

$$\Rightarrow \frac{x-\alpha}{5} = \frac{y-\beta}{3} = \frac{z-\gamma}{-1} = \lambda$$

Point of intersection

$$\alpha = p + 1 - 5\lambda, \beta = -p + 2 - 3\lambda$$

$$\gamma = 2p + 1 + \lambda$$

$$\Rightarrow |5\alpha - 11\beta - 8\gamma| = 25$$

Delivering Champions Consistently

JEE (Advanced) 2024

AIR 25 Rishi Shekher Shukla 2 Year Classroom	AIR 67 Krishna Sai Shishir 2 Year Classroom	AIR 78 Abhishek Jain 2 Year Classroom	AIR 93 Harsh Aggarwal 2 Year Classroom	AIR 95 Ujjwal Singh 2 Year Classroom	AIR 98 Rishit Aggarwal 2 Year Classroom
---	--	--	---	---	--

JEE (Main) 2024

Karnataka Topper AIR 1 Sanku Jais 2 Year Classroom	Telangana Topper AIR 15 M Sai Divya Teja Reddy 2 Year Classroom	Telangana Topper AIR 19 Rishi Shekher Shukla 2 Year Classroom
---	--	--

13. Let x_1, x_2, \dots, x_{10} be ten observations such that

$$\sum_{i=1}^{10} (x_i - 2) = 30, \quad \sum_{i=1}^{10} (x_i - \beta)^2 = 98, \quad \beta > 2, \text{ and their}$$

variance is $\frac{4}{5}$. If μ and σ^2 are respectively the mean

and the variance of $2(x_1 - 1) + 4\beta, 2(x_2 - 1) + 4\beta, \dots,$

$2(x_{10} - 1) + 4\beta$, then $\frac{\beta\mu}{\sigma^2}$ is equal to

- (1) 110 (2) 90
(3) 100 (4) 120

Answer (3)

Sol. $\sum_{i=1}^{10} (x_i - 2) = 30$

$$\sum_{i=1}^{10} x_i = 50$$

$$\Rightarrow \text{Mean} = 5$$

$$\text{Variance} = \frac{4}{5} = \frac{\sum x_i^2}{10} - (\bar{x})^2$$

$$\frac{4}{5} = \frac{\sum x_i^2}{10} - 25$$

$$\Rightarrow \sum x_i^2 = 258$$

$$\text{Now, } \sum_{i=1}^{10} (x_i - \beta)^2 = 98$$

$$\sum_{i=1}^{10} x_i^2 - 2\beta \sum_{i=1}^{10} x_i + 10\beta^2 = 98$$

$$\Rightarrow 258 - 2\beta(50) + 10\beta^2 = 98$$

$$\Rightarrow 10\beta^2 - 100\beta + 160 = 0$$

$$\Rightarrow \beta^2 - 10\beta + 16 = 0$$

$$\Rightarrow \beta = 8 \text{ as } \beta > 2$$

Now, as per the question

$$2(x_1 - 1) + 4\beta, 2(x_2 - 1) + 4\beta, \dots, 2(x_{10} - 1) + 4\beta$$

Can be simplified as

$$2x_1 + 30, 2x_2 + 30, \dots, 2x_{10} + 30$$

$$\mu = 2(5) + 30 = 40$$

$$\sigma^2 = 2^2 \left(\frac{4}{5} \right) = \frac{16}{5}$$

$$\frac{\beta\mu}{\sigma^2} = \frac{8 \times 40}{\frac{16}{5}} = 100$$

14. The least value of n for which the number of integral terms in the Binomial expansion of $(\sqrt[3]{7} + \sqrt[12]{11})^n$ is 183, is

- (1) 2184 (2) 2148
(3) 2196 (4) 2172

Answer (1)

Sol. $(\sqrt[3]{7} + \sqrt[12]{11})^n$

$$T_{K+1} = {}^nC_K 7^{\frac{n-K}{3}} 11^{\frac{K}{12}}$$

12 divides K and 3 divides $n - K$

For integer terms

\Rightarrow Multiples of 12 for K would work

$$\Rightarrow K = 0, 12, 24$$

$$\Rightarrow K_{\max} = 12 \times 182 = 2184$$

\Rightarrow Minimum value of n will be 2184

\Rightarrow Option (1) is correct

15. The number of solutions of the equation

$$\left(\frac{9}{x} - \frac{9}{\sqrt{x}} + 2 \right) \left(\frac{2}{x} - \frac{7}{\sqrt{x}} + 3 \right) = 0 \text{ is}$$

- (1) 4 (2) 3
(3) 1 (4) 2

Answer (1)

Sol. $\left(\frac{9}{x} - \frac{9}{\sqrt{x}} + 2 \right) \left(\frac{2}{x} - \frac{7}{\sqrt{x}} + 3 \right) = 0$

$$\text{Let } \frac{1}{\sqrt{x}} = t$$

$$(9t^2 - 9t + 2)(2t^2 - 7t + 3) = 0$$



Delivering Champions Consistently



Aakash
Medical | IIT-JEE | Foundations

JEE (Advanced) 2024



AIR 25
Rishi Shekher Shukla
2 Year Classroom



AIR 67
Krishna Sai Shishir
2 Year Classroom



AIR 78
Abhishek Jain
2 Year Classroom



AIR 93
Hardik Aggarwal
2 Year Classroom



AIR 95
Ujjwal Singh
2 Year Classroom



AIR 98
Rishit Aggarwal
2 Year Classroom

JEE (Main) 2024



AIR 1
Savitri Jais
2 Year Classroom



AIR 15
M Sai Divya Teja Reddy
2 Year Classroom



AIR 19
Rishi Shekher Shukla
2 Year Classroom

$$9t^2 - 9t + 2 = 0$$

$$\Rightarrow t = \frac{9 \pm \sqrt{81 - 72}}{18}$$

$$\Rightarrow t = \frac{9 \pm 3}{18}$$

$$\Rightarrow t = \frac{2}{3}, \frac{1}{3}$$

$$\Rightarrow 2t^2 - 7t + 3 = 0$$

$$\Rightarrow 2t^2 - 6t - t + 3 = 0$$

$$\Rightarrow 2t(t - 3) - 1(t - 3) = 0$$

$$t = \frac{1}{2}, 3$$

$$\Rightarrow \sqrt{x} = \frac{3}{2}, 3, 2, \frac{1}{3}$$

$$\Rightarrow x = \frac{9}{4}, 9, 4, \frac{1}{9}$$

Hence, number of solutions = 4

16. Consider an A.P. of positive integers, whose sum of the first three terms is 54 and the sum of the first twenty terms lies between 1600 and 1800. Then its 11th term is:

- (1) 84 (2) 122
(3) 90 (4) 108

Answer (3)

Sol. Let A.P. be $a, a + d, a + 2d$

$$3a + 3d = 54$$

$$a + d = 18 \quad \dots (1)$$

$$1600 < \frac{20}{2}[2a + 19d] < 1800$$

$$160 < 2a + 19d < 180$$

$$160 < 18 \times 2 + 17d < 180$$

$$\frac{124}{7} < d < \frac{144}{17}$$

$$\therefore d \in \text{integer} \Rightarrow d = 8$$

$$a + d = 18$$

$$\Rightarrow a = 10$$

$$a_{11} = a + 10d$$

$$= 10 + 10 \times 8 = 90$$

17. Let the ellipse $E_1: \frac{x^2}{a^2} + \frac{y^2}{b^2} = 1$, $a > b$ and

$$E_2: \frac{x^2}{A^2} + \frac{y^2}{B^2} = 1, A < B \text{ have same eccentricity}$$

$\frac{1}{\sqrt{3}}$. Let the product of their lengths of latus

rectums be $\frac{32}{\sqrt{3}}$, and the distance between the foci

of E_1 be 4. If E_1 and E_2 meet at A, B, C and D , then the area of the quadrilateral $ABCD$ equals

- (1) $6\sqrt{6}$ (2) $\frac{24\sqrt{6}}{5}$
(3) $\frac{12\sqrt{6}}{5}$ (4) $\frac{18\sqrt{6}}{5}$

Answer (2)

Sol. $2ae = 4$

$$\Rightarrow a = 2\sqrt{3}$$

$$\Rightarrow 1 - \frac{b^2}{12} = \frac{1}{3} \Rightarrow b^2 = 8$$

$$\frac{2b^2}{a} \times \frac{2A^2}{B} = \frac{32}{\sqrt{3}}$$

$$\Rightarrow \frac{2 \times 8}{2\sqrt{3}} \times \frac{2A^2}{B} = \frac{32}{\sqrt{3}}$$

$$\Rightarrow \frac{A^2}{B} = 2 \Rightarrow A^2 = 2B$$

$$1 - \frac{A^2}{B} = \frac{1}{3}$$

$$\Rightarrow B = 3 \Rightarrow A^2 = 6$$

$$E_1: \frac{x^2}{12} + \frac{y^2}{8} = 1 \quad \dots (i)$$

$$E_2: \frac{x^2}{6} + \frac{y^2}{9} = 1 \quad \dots (ii)$$

On solving (i) & (ii)

$$(x, y) = \left(\frac{\sqrt{6}}{\sqrt{5}}, \frac{6}{\sqrt{5}} \right), \left(\frac{-\sqrt{6}}{\sqrt{5}}, \frac{6}{\sqrt{5}} \right), \left(\frac{\sqrt{6}}{\sqrt{5}}, \frac{-6}{\sqrt{5}} \right),$$

$$\left(\frac{-\sqrt{6}}{\sqrt{5}}, \frac{-6}{\sqrt{5}} \right)$$

Four points are vertices of rectangle area = $\frac{24\sqrt{6}}{5}$



Delivering Champions Consistently



 Medical | IIT-JEE | Foundations

JEE (Advanced) 2024



AIR 25
Rishi Shekher Shukla
2 Year Classroom



AIR 67
Krishna Sai Shishir
2 Year Classroom



AIR 78
Abhishek Jain
2 Year Classroom



AIR 93
Hardik Aggarwal
2 Year Classroom



AIR 95
Ujjwal Singh
2 Year Classroom



AIR 98
Rashit Aggarwal
2 Year Classroom

JEE (Main) 2024



AIR 1
Sanyal Jain
2 Year Classroom



AIR 15
M Sai Divya Teja Reddy
2 Year Classroom



AIR 19
Rishi Shekher Shukla
2 Year Classroom

18. Let $\vec{a} = \hat{i} + 2\hat{j} + \hat{k}$ and $\vec{b} = 2\hat{i} + 7\hat{j} + 3\hat{k}$. Let
 $L_1 : \vec{r} = (-\hat{i} + 2\hat{j} + \hat{k}) + \lambda\vec{a}, \lambda \in \mathbf{R}$ and
 $L_2 : \vec{r} = (\hat{j} + \hat{k}) + \mu\vec{b}, \mu \in \mathbf{R}$ be two lines. If the line L_3
 passes through the point of intersection of L_1 and L_2
 and is parallel to $\vec{a} + \vec{b}$, then L_3 passes through the
 point
 (1) (8, 26, 12) (2) (2, 8, 5)
 (3) (5, 17, 4) (4) (-1, -1, 1)

Answer (1)

Sol. $\vec{a} = \hat{i} + 2\hat{j} + \hat{k}$

$$\vec{b} = 2\hat{i} + 7\hat{j} + 3\hat{k}$$

$$L_1 : \vec{r} = (-\hat{i} + 2\hat{j} + \hat{k}) + \lambda\vec{a}, \lambda \in \mathbf{R}$$

$$\text{and } L_2 = (\hat{j} + \hat{k}) + \mu\vec{b}, \mu \in \mathbf{R}$$

$$\vec{a} + \vec{b} = 3\hat{i} + 9\hat{j} + 4\hat{k}$$

$$L_1 : \vec{r} = (\lambda - 1)\hat{i} + 2(\lambda + 1)\hat{j} + (\lambda + 1)\hat{k}$$

$$L_2 : \vec{r} = 2\mu\hat{i} + (7\mu + 1)\hat{j} + (1 + 3\mu)\hat{k}$$

For point of intersection of L_1 & L_2

$$\lambda - 1 = 2\mu \text{ and } 2(\lambda + 1) = 7\mu + 1$$

$$\Rightarrow \lambda = 3 \text{ and } \mu = 1$$

$$L_3 : \vec{r} = 2\hat{i} + 8\hat{j} + 4\hat{k} + \alpha(3\hat{i} + 9\hat{j} + 4\hat{k})$$

For $\alpha = 2$

$$\vec{r} = 8\hat{i} + 26\hat{j} + 12\hat{k}$$

19. Two parabolas have the same focus (4, 3) and their
 directrices are the x -axis and the y -axis,
 respectively. If these parabolas intersect at the
 points A and B , then $(AB)^2$ is equal to :
 (1) 392 (2) 192
 (3) 384 (4) 96

Answer (2)

Sol. The parabolas are

$$(x - 4)^2 + (y - 3)^2 = x^2 \quad \dots(i)$$

$$\text{and } (x - 4)^2 + (y - 3)^2 = y^2 \quad \dots(ii)$$

If point of intersection are $A(x_1, y_1)$ and $B(x_2, y_2)$

By solving (i) and (ii), we get

$$x_1 + x_2 = 14 \text{ and } x_1 x_2 = 25$$

$$(AB)^2 = 2((x_1 + x_2)^2 - 4 x_1 x_2) = 192$$

20. Let the line $x + y = 1$ meet the circle $x^2 + y^2 = 4$ at
 the points A and B . If the line perpendicular to AB
 and passing through the mid-point of the chord AB
 intersects the circle at C and D , then the area of the
 quadrilateral $ADBC$ is equal to:

$$(1) 2\sqrt{14}$$

$$(2) 3\sqrt{7}$$

$$(3) 5\sqrt{7}$$

$$(4) \sqrt{14}$$

Answer (1)

Sol. Solving $x = y$ & $x^2 + y^2 = 4$ gives

$$C(\sqrt{2}, \sqrt{2}) \text{ and } D(-\sqrt{2}, -\sqrt{2})$$

Solving $x + y = 1$ & $x^2 + y^2 = 4$ gives

$$A\left(\frac{1+\sqrt{7}}{2}, \frac{1-\sqrt{7}}{2}\right) \text{ \& } B\left(\frac{1-\sqrt{7}}{2}, \frac{1+\sqrt{7}}{2}\right)$$

$$\text{Required area} = 2 \times \frac{1}{2} \begin{vmatrix} \sqrt{2} & \sqrt{2} & 1 \\ \frac{1-\sqrt{7}}{2} & \frac{1+\sqrt{7}}{2} & 1 \\ -\sqrt{2} & -\sqrt{2} & 1 \end{vmatrix}$$

$$= 2\sqrt{14} \text{ sq. units}$$



Delivering Champions Consistently



Medical | IIT-JEE | Foundations

JEE (Advanced) 2024



AIR 25
Rishi Shekher Shukla
2 Year Classroom



AIR 67
Krishna Sai Shishir
2 Year Classroom



AIR 78
Abhishek Jain
2 Year Classroom



AIR 93
Harsh Aggarwal
2 Year Classroom



AIR 95
Ujjwal Singh
2 Year Classroom



AIR 98
Rishit Aggarwal
2 Year Classroom

JEE (Main) 2024



AIR 1
Savitri Jain
2 Year Classroom



AIR 15
M Sai Divya Teja Reddy
2 Year Classroom



AIR 19
Rishi Shekher Shukla
2 Year Classroom

SECTION - B

Numerical Value Type Questions: This section contains 5 Numerical based questions. The answer to each question should be rounded-off to the nearest integer.

21. Let $[t]$ be the greatest integer less than or equal to t . Then the least value of $p \in \mathbb{N}$ for which

$$\lim_{x \rightarrow 0^+} \left(x \left(\left[\frac{1}{x} \right] + \left[\frac{2}{x} \right] + \dots + \left[\frac{p}{x} \right] \right) - x^2 \left(\left[\frac{1}{x^2} \right] + \left[\frac{2^2}{x^2} \right] + \dots + \left[\frac{9^2}{x^2} \right] \right) \right) \geq 1$$

is equal to _____.

Answer (24)

Sol. $\lim_{x \rightarrow 0^+} \left(x \left(\left[\frac{1}{x} \right] + \left[\frac{2}{x} \right] + \dots + \left[\frac{p}{x} \right] \right) - x^2 \left(\left[\frac{1}{x^2} \right] + \left[\frac{2^2}{x^2} \right] + \dots + \left[\frac{9^2}{x^2} \right] \right) \right) \geq 1$

$$\Rightarrow (1 + 2 + 3 + \dots + p) - (1^2 + 2^2 + \dots + 9^2) \geq 1$$

$$\Rightarrow \frac{p(p+1)}{2} - \frac{9(10)(19)}{6} \geq 1$$

$$\Rightarrow p(p+1) \geq 572$$

$$\Rightarrow \text{Least natural values of } p \text{ is } 24$$

22. Let $f : (0, \infty) \rightarrow \mathbb{R}$ be a twice differentiable function.

If for some $a \neq 0$, $\int_0^1 f(\lambda x) d\lambda = af(x)$, $f(1) = 1$ and

$f(16) = \frac{1}{8}$, then $16 - f'\left(\frac{1}{16}\right)$ is equal to _____.

Answer (112)

Sol. Given, $\int_0^1 f(\lambda x) d\lambda = af(x) \dots (1)$

Let $\lambda x = u$

$$d\lambda = \frac{1}{x} du$$

\therefore From (1) $\frac{1}{x} \int_0^x f(u) du = af(x)$

$$\Rightarrow \int_0^x f(u) du = axf(x)$$

Differentiate both sides

$$f(x) = a(xf'(x) + f(x))$$

$$\Rightarrow f(x) = axf'(x) + af(x)$$

$$\Rightarrow (1-a)f(x) = axf'(x)$$

$$\Rightarrow \frac{f'(x)}{f(x)} = \frac{(1-a)}{a} \cdot \frac{1}{x}$$

Integrate both side w.r.t. (x)

$$\Rightarrow \int \frac{f'(x)}{f(x)} dx = \frac{(1-a)}{a} \int \frac{1}{x} dx$$

$$\Rightarrow \ln f(x) = \left(\frac{1-a}{a} \right) \ln x + c$$

Now at $x = 1$ $f(1) = 1$

$$\Rightarrow c = 0$$

Also given $f(16) = \frac{1}{8}$

$$\therefore \frac{1}{8} = (16)^{\frac{1-a}{a}}$$

$$\Rightarrow 2^{-3} = 2^{\frac{4-4a}{a}}$$

$$\Rightarrow -3 = \frac{4-4a}{a}$$

$$\Rightarrow -3a = 4 - 4a$$

$$\Rightarrow a = 4$$

$$\therefore f(x) = x^{-3/4}$$

$$f(x) = \frac{-3}{4} x^{-7/4}$$

Put $x = \frac{1}{16}$

$$f'\left(\frac{1}{16}\right) = \frac{-3}{4} \left(\frac{1}{16}\right)^{-7/4} = \frac{-3}{4} \cdot 2^{-4 \times (-7/4)} = -96$$

$$\therefore 16 - f'\left(\frac{1}{16}\right) \Rightarrow 16 - (-96) = 112$$



Delivering Champions Consistently



Medical | IIT-JEE | Foundations

JEE (Advanced) 2024



AIR 25
Rishi Shekher Shukla
2 Year Classroom



AIR 67
Krishna Sai Shishir
2 Year Classroom



AIR 78
Abhishek Jain
2 Year Classroom



AIR 93
Hardik Aggarwal
2 Year Classroom



AIR 95
Ujjwal Singh
2 Year Classroom



AIR 98
Rishit Aggarwal
2 Year Classroom

JEE (Main) 2024



AIR 1
Savitri Jain
2 Year Classroom

Telangana Topper



AIR 15
M Sai Divya Teja Reddy
2 Year Classroom

Telangana Topper



AIR 19
Rishi Shekher Shukla
2 Year Classroom

23. Let $S = \{x : \cos^{-1} x = \pi + \sin^{-1} x + \sin^{-1}(2x+1)\}$.

Then $\sum_{x \in S} (2x-1)^2$ is equal to ____.

Answer (5)

Sol. $\cos^{-1} x = \pi + \sin^{-1} x + \sin^{-1}(2x+1)$.

$$\frac{\pi}{2} - \sin^{-1} x = \pi + \sin^{-1} x + \sin^{-1}(2x+1)$$

$$-\frac{\pi}{2} - 2\sin^{-1} x = \sin^{-1}(2x+1)$$

$$\sin\left(-\frac{\pi}{2} - 2\sin^{-1} x\right) = \sin(\sin^{-1}(2x+1))$$

$$-\cos(2\sin^{-1} x) = (2x+1)$$

$$-(1-2x^2) = 2x+1$$

$$-1+2x^2 = 2x+1$$

$$2x^2 - 2x - 2 = 0$$

$$x = \frac{2 \pm \sqrt{4+16}}{4}$$

$$x = \frac{2 \pm 2\sqrt{5}}{4} = \frac{1 \pm \sqrt{5}}{2} \left\{ x = \frac{1+\sqrt{5}}{2} \text{ rejected} \right\}$$

$$\text{So, } \sum_{x \in S} (2x-1)^2 = 5$$

24. The number of 6-letter words, with or without meaning, that can be formed using the letters of the word MATHS such that any letter that appears in the word must appear at least twice is

Answer (1405)

$$\text{Sol. } {}^5C_3 \times \frac{6!}{2!2!2!} + {}^5C_2 \left(\frac{6!}{2!4!} \times 2 + \frac{6!}{3!3!} \right) + {}^5C_1 \cdot 1$$

$$= 10 \times 90 + 10(15 \times 2 + 20) + 5$$

$$= 900 + 500 + 5$$

$$= 1405$$

25. Let $S = \left\{ m \in \mathbf{Z} : A^{m^2} + A^m = 3I - A^{-6} \right\}$, where

$$A = \begin{bmatrix} 2 & -1 \\ 1 & 0 \end{bmatrix}. \text{ Then } n(S) \text{ is equal to } \underline{\hspace{2cm}}.$$

Answer (2)

$$\text{Sol. } A = \begin{bmatrix} 2 & -1 \\ 1 & 0 \end{bmatrix}$$

Now finding characteristic equation

$$\begin{vmatrix} 2-\lambda & -1 \\ 1 & -\lambda \end{vmatrix} = 0$$

$$\Rightarrow (2-\lambda)(-\lambda) - (-1)(1) = -2\lambda + \lambda^2 + 1 = 0$$

$$\Rightarrow \lambda^2 - 2\lambda + 1 = 0$$

$$\Rightarrow (\lambda - 1)^2 = 0$$

$$\Rightarrow \lambda = 1$$

Since A satisfies $(A - I)^2 = 0$

$\therefore A = I + N$ where

$$N = A - I$$

$$N = \begin{bmatrix} 1 & -1 \\ 1 & -1 \end{bmatrix}$$

$$N^2 = 0$$

$$A^m = (I + N)^m = I + mN$$

$$A^m \cdot A^m = (I + mN)(I + mN) = I + 2mN + m^2N^2$$

Since $N^2 = 0$

$$\Rightarrow A^{m^2} = I + 2mN$$

Now putting in given condition

$$I + m^2N + I + mN = 3I - A^{-6} \quad \dots(i)$$

$$A^{-1} = \begin{bmatrix} 0 & 1 \\ -1 & 2 \end{bmatrix}$$

$$A^{-6} = (A^{-1})^6 = I + (-6)N$$

\therefore Putting in (i)

$$(m^2 + m)N = I - (I - 6N)$$

$$(m^2 + m)N = 6N$$

Since $N \neq 0$

$$\Rightarrow m^2 + m = 6$$

$$\Rightarrow m^2 + m - 6 = 0$$

$$\Rightarrow (m-2)(m+3) = 0$$

$$\Rightarrow m = 2, -3$$

\therefore Number of elements in S is 2



Delivering Champions Consistently

JEE (Advanced) 2024

AIR 25 Rishi Shekher Shukla 2 Year Classroom	AIR 67 Krishna Sai Shishir 2 Year Classroom	AIR 78 Abhishek Jain 2 Year Classroom	AIR 93 Harsh Aggarwal 2 Year Classroom	AIR 95 Ujjwal Singh 2 Year Classroom	AIR 98 Rishabh Aggarwal 2 Year Classroom
---	--	--	---	---	---

JEE (Main) 2024

Karnataka Topper AIR 1 Sanvi Jain 2 Year Classroom	Telangana Topper AIR 15 M Sai Divya Teja Reddy 2 Year Classroom	Telangana Topper AIR 19 Rishi Shekher Shukla 2 Year Classroom
---	--	--

PHYSICS

SECTION - A

Multiple Choice Questions: This section contains 20 multiple choice questions. Each question has 4 choices (1), (2), (3) and (4), out of which **ONLY ONE** is correct.

Choose the correct answer :

26. The workdone in an adiabatic change in an ideal gas depends upon only :

- (1) Change in its volume
- (2) Change in its temperature
- (3) Change in its pressure
- (4) Change in its specific heat

Answer (2)

Sol. Work done in adiabatic process = $\frac{nR\Delta T}{1-\gamma}$

So, depends upon change in temperature.

27. Two projectiles are fired with same initial speed from same point on ground at angles of $(45^\circ - \alpha)$ and $(45^\circ + \alpha)$, respectively, with the horizontal direction. The ratio of their maximum heights attained is :

- | | |
|---|---|
| (1) $\frac{1 + \sin 2\alpha}{1 - \sin 2\alpha}$ | (2) $\frac{1 + \sin \alpha}{1 - \sin \alpha}$ |
| (3) $\frac{1 - \tan \alpha}{1 + \tan \alpha}$ | (4) $\frac{1 - \sin 2\alpha}{1 + \sin 2\alpha}$ |

Answer (4)

Sol. $H_{\max} = \frac{u^2 \sin^2 \theta}{2g}$

$$\frac{H_1}{H_2} = \frac{\sin^2(45^\circ - \alpha)}{\sin^2(45^\circ + \alpha)}$$

$$= \frac{(\cos \alpha - \sin \alpha)^2}{(\cos \alpha + \sin \alpha)^2}$$

$$\frac{H_1}{H_2} = \frac{1 - \sin 2\alpha}{1 + \sin 2\alpha}$$

28. Consider a long straight wire of a circular cross-section (radius a) carrying a steady current I . The current is uniformly distributed across this cross-section. The distances from the centre of the wire's cross-section at which the magnetic field [inside the wire, outside the wire] is half of the maximum possible magnetic field, anywhere due to the wire, will be

- | | |
|-----------------|-------------------|
| (1) $[a/2, 2a]$ | (2) $[a/2, 3a]$ |
| (3) $[a/4, 2a]$ | (4) $[a/4, 3a/2]$ |

Answer (1)

Sol. Magnetic field inside cylinder at distance r from axis

$$= \frac{\mu_0 I}{\pi R^2} \cdot \frac{r}{2}$$

$$B_{\max} = \frac{\mu_0 I}{2\pi R}$$

$$\frac{\mu_0 I}{2\pi R^2} r_1 = \frac{1}{2} \left(\frac{\mu_0 I}{2\pi R} \right)$$

$$r_1 = \frac{R}{2} = \frac{a}{2}$$

Magnetic field outside cylinder at distance r from axis

$$= \frac{\mu_0 I}{2\pi r}$$

$$\frac{\mu_0 I}{2\pi r_2} = \frac{1}{2} \left(\frac{\mu_0 I}{2\pi R} \right)$$

$$r_2 = 2R = 2a$$

29. At the interface between two materials having refractive indices n_1 and n_2 , the critical angle for reflection of an em wave is θ_{1C} . The n_2 material is replaced by another material having refractive index n_3 such that the critical angle at the interface between n_1 and n_3 materials is θ_{2C} . If $n_3 > n_2 > n_1$;


$\frac{n_2}{n_3} = \frac{2}{5}$ and $\sin \theta_{2C} - \sin \theta_{1C} = \frac{1}{2}$, then θ_{1C} is

- | | |
|---|---|
| (1) $\sin^{-1} \left(\frac{1}{3n_1} \right)$ | (2) $\sin^{-1} \left(\frac{1}{6n_1} \right)$ |
| (3) $\sin^{-1} \left(\frac{5}{6n_1} \right)$ | (4) $\sin^{-1} \left(\frac{2}{3n_1} \right)$ |

Answer (*)



Delivering Champions Consistently



Medical | IIT-JEE | Foundations

JEE (Advanced) 2024



AIR 25

Rishi Shekher Shukla
2 Year Classroom

JEE (Main) 2024



AIR 67

Krishna Sai Shishir
2 Year Classroom

JEE (Advanced) 2024



AIR 78

Abhishek Jain
2 Year Classroom

JEE (Advanced) 2024



AIR 93

Hardik Aggarwal
2 Year Classroom

JEE (Advanced) 2024



AIR 95

Ujjwal Singh
2 Year Classroom

JEE (Advanced) 2024



AIR 98

Rashik Aggarwal
2 Year Classroom

JEE (Main) 2024



AIR 1

Sanvi Jain
2 Year Classroom

JEE (Main) 2024



AIR 15

M Sai Divya Teja Reddy
2 Year Classroom

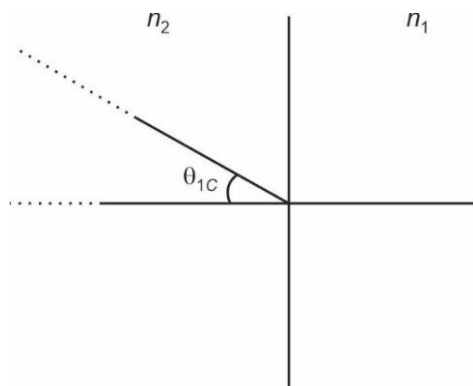
JEE (Main) 2024



AIR 19

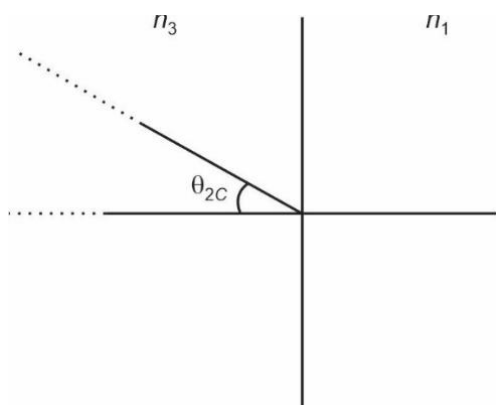
Rishi Shekher Shukla
2 Year Classroom

Sol.



$$n_2 \sin(\theta_{1C}) = n_1$$

$$\sin(\theta_{1C}) = \frac{n_1}{n_2}$$



$$n_3 \sin(\theta_{2C}) = n_1$$

$$\Rightarrow \sin(\theta_{2C}) = \frac{n_1}{n_3}$$

$$\text{Also, } n_3 = \frac{5n_2}{2} \Rightarrow \sin(\theta_{2C}) = \frac{2n_1}{5n_2}$$

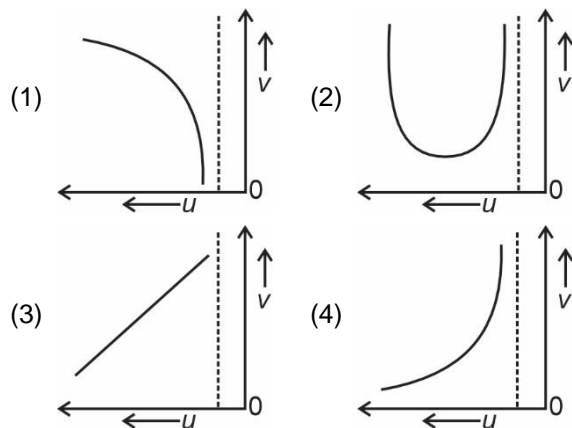
$$\Rightarrow \frac{n_1}{n_2} = \frac{5}{2} \cdot \sin(\theta_{2C}) \Rightarrow \sin(\theta_{2C}) - \sin(\theta_{1C}) = \frac{1}{2}$$

$$\text{Given, } \frac{2n_1}{5n_2} - \frac{n_1}{n_2} = \frac{1}{2} \Rightarrow \frac{n_1}{n_2} \left(\frac{-3}{5} \right) = \frac{1}{2}$$

Coming out to be (-ve)

*** None of the answer is matching**

30. Let u and v be the distances of the object and the image from a lens of focal length f . The correct graphical representation of u and v for a convex lens when $|u| > f$, is



Answer (4)

Sol. Lens formula $\frac{1}{v} - \frac{1}{u} = \frac{1}{f}$

$$\frac{1}{v} = \frac{1}{f} + \frac{1}{u}$$

Since $|u| > f$

So, RHS is positive.

31. The pair of physical quantities not having same dimensions is :

- (1) Angular momentum and Planck's constant
- (2) Torque and energy
- (3) Surface tension and impulse
- (4) Pressure and Young's modulus

Answer (3)

Sol. [Angular momentum] = ML^2T^{-1}

[Planck's Constant] = ML^2T^{-1}

[Torque] = ML^2T^{-2}

[Energy] = ML^2T^{-2}

[Surface tension] = MT^{-2}

[Impulse] = MLT^{-1}

[Pressure] = $ML^{-1}T^{-2}$

[Young's modulus] = $ML^{-1}T^{-2}$

> Delivering Champions Consistently

Aakash
Medical | IIT-JEE | Foundations

JEE (Advanced) 2024

AIR 25 Rishi Shekher Shukla
2 Year Classroom

Krishna Sai Shishir, AIR 67, 4 Year Classroom

AIR 67 Krishna Sai Shishir
4 Year Classroom

Abhishek Jain, AIR 78, 4 Year Classroom

AIR 78 Abhishek Jain
4 Year Classroom

Hardik Aggarwal, AIR 93, 2 Year Classroom

AIR 93 Hardik Aggarwal
2 Year Classroom

Ujjwal Singh, AIR 95, 4 Year Classroom

AIR 95 Ujjwal Singh
4 Year Classroom

Rachit Aggarwal, AIR 98, 4 Year Classroom

AIR 98 Rachit Aggarwal
4 Year Classroom

JEE (Main) 2024

AIR 1 Sanvi Jain
2 Year Classroom

Karnataka Topper, AIR 15, 2 Year Classroom

AIR 15 M Sai Divya Toja Reddy
2 Year Classroom

Telangana Topper, AIR 19, 2 Year Classroom

AIR 19 Rishi Shekher Shukla
2 Year Classroom

32. The expression given below shows the variation of velocity (v) with time (t), $v = At^2 + \frac{Bt}{C+t}$. The

dimension of ABC is :

- (1) $[M^0L^1T^{-2}]$ (2) $[M^0L^1T^{-3}]$
 (3) $[M^0L^2T^{-3}]$ (4) $[M^0L^2T^{-2}]$

Answer (3)

Sol. $v = At^2 + \frac{Bt}{C+t}$

$$[v] = [A] t^2 = \left[\frac{Bt}{C+t} \right]$$

$$[A] = LT^{-3}$$

$$[C] = T$$

$$[B] = LT^{-1}$$

$$[ABC] = L^2T^{-3}$$

33. Given below are two statements: one is labelled as **Assertion (A)** and the other is labelled as **Reason (R)**.

Assertion (A) : Choke coil is simply a coil having a large inductance but a small resistance. Choke coils are used with fluorescent mercury-tube fittings. If household electric power is directly connected to a mercury tube, the tube will be damaged.

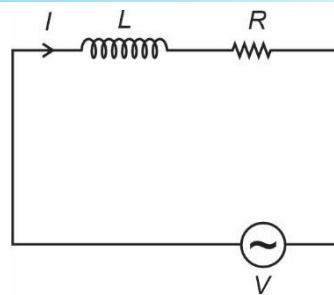
Reason (R) : By using the choke coil, the voltage across the tube is reduced by a factor $\left(\frac{R}{\sqrt{R^2 + \omega^2 L^2}} \right)$, where ω is frequency of the supply across resistor R and inductor L . If the choke coil were not used, the voltage across the resistor would be the same as the applied voltage.

In the light of the above statements, choose the **most appropriate answer** from the options given below:

- (1) Both **(A)** and **(R)** are true but **(R)** is not the correct explanation of **(A)**
 (2) Both **(A)** and **(R)** are true and **(R)** is the correct explanation of **(A)**
 (3) **(A)** is false but **(R)** is true
 (4) **(A)** is true but **(R)** is false

Answer (1)

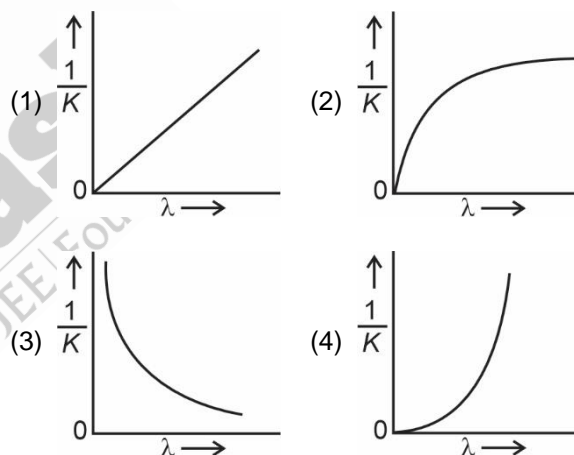
Sol.



$$I = \frac{V}{\sqrt{R^2 + \omega^2 L^2}}$$

$$V_R = \frac{R}{\sqrt{R^2 + \omega^2 L^2}} V$$

34. If λ and K are de Broglie wavelength and kinetic energy, respectively, of a particle with constant mass. The correct graphical representation for the particle will be



Answer (4)

Sol. $\lambda = \frac{h}{\sqrt{2mK}}$

$$\lambda^2 = \frac{h^2}{2mK}$$

$$\frac{1}{K} = \left(\frac{2m}{h^2} \right) \lambda^2$$



Delivering Champions Consistently



Medical | IIT-JEE | Foundations

JEE (Advanced) 2024



AIR 25
Rishi Shekher Shukla
2 Year Classroom



AIR 67
Krishna Sai Shishir
2 Year Classroom



AIR 78
Abhishek Jain
2 Year Classroom



AIR 93
Harsh Aggarwal
2 Year Classroom



AIR 95
Ujjwal Singh
2 Year Classroom



AIR 98
Rashit Aggarwal
2 Year Classroom

JEE (Main) 2024



AIR 1
Sanvi Jain
2 Year Classroom



AIR 15
M Sai Divya Teja Reddy
2 Year Classroom



AIR 19
Rishi Shekher Shukla
2 Year Classroom

35. Consider I_1 and I_2 are the currents flowing simultaneously in two nearby coils 1 & 2, respectively. If L_1 = self inductance of coil 1, M_{12} = mutual inductance of coil 1 with respect to coil 2, then the value of induced emf in coil 1 will be

- (1) $\varepsilon_1 = -L_1 \frac{dI_1}{dt} - M_{12} \frac{dI_2}{dt}$
 (2) $\varepsilon_1 = -L_1 \frac{dI_2}{dt} - M_{12} \frac{dI_1}{dt}$
 (3) $\varepsilon_1 = -L_1 \frac{dI_1}{dt} + M_{12} \frac{dI_2}{dt}$
 (4) $\varepsilon_1 = -L_1 \frac{dI_1}{dt} - M_{12} \frac{dI_1}{dt}$

Answer (1)

Sol. Magnitude of induced emf due to self inductance

$$= \frac{L dI_1}{dt}$$

Magnitude of induced emf due to mutual inductance

$$= \frac{M dI_2}{dt}$$

36. Given below are two statements : one is labelled as **Assertion (A)** and the other is labelled as **Reason (R)**.

Assertion (A) : Electromagnetic waves carry energy but not momentum.

Reason (R) : Mass of a photon is zero.

In the light of the above statements, choose the **most appropriate answer** from the options given below :

- (1) Both **(A)** and **(R)** are true but **(R)** is not the correct explanation of **(A)**
 (2) **(A)** is false but **(R)** is true
 (3) **(A)** is true but **(R)** is false
 (4) Both **(A)** and **(R)** are true and **(R)** is the correct explanation of **(A)**

Answer (2)

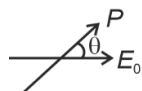
Sol. EM wave carry both energy and momentum. Rest mass of photon is zero.

37. An electric dipole of mass m , charge q , and length l is placed in a uniform electric field $\vec{E} = E_0 \hat{i}$. When the dipole is rotated slightly from its equilibrium position and released, the time period of its oscillations will be :

- (1) $2\pi \sqrt{\frac{ml}{2qE_0}}$ (2) $\frac{1}{2\pi} \sqrt{\frac{ml}{2qE_0}}$
 (3) $2\pi \sqrt{\frac{ml}{qE_0}}$ (4) $\frac{1}{2\pi} \sqrt{\frac{2ml}{qE_0}}$

Answer (1)

Sol. $\rightarrow E_0$



$$\tau = PE_0 \sin \theta$$

If θ is small

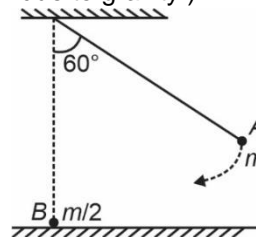
$$\tau = -(PE_0)\theta$$

$$I = m \left(\frac{l}{2} \right)^2 \cdot 2 = \frac{ml^2}{2}$$

$$T = 2\pi \sqrt{\frac{ml^2}{2 \cdot PE_0}} = 2\pi \sqrt{\frac{ml^2}{2 \cdot qlE_0}}$$

$$T = 2\pi \sqrt{\frac{ml}{2qE_0}}$$

38. As shown below, bob A of a pendulum having massless string of length ' R ' is released from 60° to the vertical. It hits another bob B of half the mass that is at rest on a frictionless table in the center. Assuming elastic collision, the magnitude of the velocity of bob A after the collision will be (take g as acceleration due to gravity.)



- (1) $\frac{1}{3} \sqrt{Rg}$ (2) \sqrt{Rg}
 (3) $\frac{4}{3} \sqrt{Rg}$ (4) $\frac{2}{3} \sqrt{Rg}$

Answer (1)

Delivering Champions Consistently

Aakash
Medical | IIT-JEE | Foundations

JEE (Advanced) 2024

AIR 25
Rishi Shekher Shukla
2 Year Classroom

AIR 67
Krishna Sai Shishir
2 Year Classroom

AIR 78
Abhishek Jain
2 Year Classroom

AIR 93
Hardik Aggarwal
2 Year Classroom

AIR 95
Ujjwal Singh
2 Year Classroom

AIR 98
Rachit Aggarwal
2 Year Classroom

JEE (Main) 2024

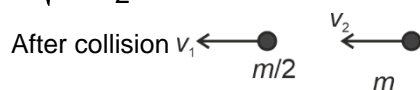
AIR 1
Sanyal Jain
2 Year Classroom

AIR 15
M Sai Divya Toja Reddy
2 Year Classroom

AIR 19
Rishi Shekher Shukla
2 Year Classroom

Sol. Velocity of A before collision $= \sqrt{2gh}$

$$= \sqrt{2g \times \frac{R}{2}} = \sqrt{Rg}$$



COM

$$mu = \frac{m}{2}v_1 + mv_2$$

$$2u = v_1 + 2v_2 \quad \dots(i)$$

$$e = 1, u = v_1 - v_2 \quad \dots(ii)$$

$$u = 3v_2$$

$$v_2 = \frac{u}{3} = \frac{1}{3}\sqrt{Rg}$$

39. Match **List-I** with **List-II**.

	List-I		List-II
(A)	Electric field inside (distance $r > 0$ from center) of a uniformly charged spherical shell with surface charge density σ , and radius R .	(I)	σ / ϵ_0
(B)	Electric field at distance $r > 0$ from a uniformly charged infinite plane sheet with surface charge density σ .	(II)	$\sigma / 2\epsilon_0$
(C)	Electric field outside (distance $r > 0$ from center) of a uniformly charged spherical shell with surface charge density σ , and radius R .	(III)	0
(D)	Electric field between 2 oppositely charged infinite plane parallel sheets with uniform surface charge density σ .	(IV)	$\frac{\sigma}{\epsilon_0 r^2}$

Choose the **correct** answer from the options given below:

- (1) (A)-(II), (B)-(I), (C)-(IV), (D)-(III)
 (2) (A)-(III), (B)-(II), (C)-(IV), (D)-(I)
 (3) (A)-(IV), (B)-(II), (C)-(III), (D)-(I)
 (4) (A)-(IV), (B)-(I), (C)-(III), (D)-(II)

Answer (*)

Sol. Inside uniformly charged spherical

shell, $E = 0$

$\therefore A \rightarrow \text{III}$

For uniformly charged infinite plate

$$E = \frac{\sigma}{2\epsilon_0}$$

$B \rightarrow \text{II}$

Outside of spherical shell

$$E = \frac{Q}{4\pi\epsilon_0 r^2} = \frac{\sigma R^2}{\epsilon_0 r^2}$$

None of the option is matching for C.

Between two plates $E = \frac{\sigma}{\epsilon_0}$

$D \rightarrow \text{I}$

None of the option is correct

40. The fractional compression $\left(\frac{\Delta V}{V}\right)$ of water at the depth of 2.5 km below the sea level is _____.
 Given, the Bulk modulus of water $= 2 \times 10^9 \text{ Nm}^{-2}$, density of water $= 10^3 \text{ kg m}^{-3}$, acceleration due to gravity $= g = 10 \text{ ms}^{-2}$.

- (1) 1.25
 (2) 1.5
 (3) 1.0
 (4) 1.75

Answer (1)

Sol. $B = \frac{\Delta P}{-\left(\frac{\Delta V}{V}\right)}$

$$-\left(\frac{\Delta V}{V}\right) = \frac{\Delta P}{B} = \frac{\rho gh}{B}$$

$$= \frac{10^3 \times 10 \times 2.5 \times 10^3}{2 \times 10^9} = 1.25\%$$



Delivering Champions Consistently




Medical | IIT-JEE | Foundations


JEE (Advanced) 2024




AIR 25
Rishi Shekher Shukla
2 Year Classroom




AIR 67
Krishna Sai Shishir
2 Year Classroom



AIR 78
Abhishek Jain
2 Year Classroom



AIR 93
Harsh Aggarwal
2 Year Classroom



AIR 95
Ujjwal Singh
2 Year Classroom



AIR 98
Rachit Aggarwal
2 Year Classroom

JEE (Main) 2024



AIR 1
Sanvi Jain
2 Year Classroom



AIR 15
M Sai Divya Teja Reddy
2 Year Classroom



AIR 19
Rishi Shekher Shukla
2 Year Classroom

41. Given below are two statements : one is labelled as **Assertion (A)** and the other is labelled as **Reason (R)**.

Assertion (A) : Emission of electrons in photoelectric effect can be suppressed by applying a sufficiently negative electron potential to the photoemissive substance.

Reason (R) : A negative electric potential, which stops the emission of electrons from the surface of a photoemissive substance, varies linearly with frequency of incident radiation.

In the light of the above statements, choose the **most appropriate answer** from the options given below :

- (1) (A) is true but (R) is false
- (2) Both (A) and (R) are true and (R) is the correct explanation of (A)
- (3) (A) is false but (R) is true
- (4) Both (A) and (R) are true but (R) is **not** the correct explanation of (A)

Answer (4)

Sol. Negative potential will slow the electrons and if it is sufficient, it will make the photocurrent zero.

$$eVs = hf - \phi_0$$

42. Given below are two statements : one is labelled as **Assertion (A)** and the other is labelled as **Reason (R)**.

Assertion (A) : Time period of a simple pendulum is longer at the top of a mountain than that at the base of the mountain.

Reason (R) : Time period of a simple pendulum decreases with increasing value of acceleration due to gravity and vice-versa.

In the light of the above statements, choose the **most appropriate answer** from the options given below :

- (1) (A) is false but (R) is true
- (2) (A) is true but (R) is false
- (3) Both (A) and (R) are true but (R) is not the correct explanation of (A)
- (4) Both (A) and (R) are true and (R) is the correct explanation of (A)

Answer (4)

Sol. $T = 2\pi\sqrt{\frac{l}{g}}$

At top of mountain $g \downarrow$, $\therefore T \uparrow$

43. A coil of area A and N turns is rotating with angular velocity ω in a uniform magnetic field \vec{B} about an axis perpendicular to \vec{B} . Magnetic flux ϕ and induced emf ε across it, at an instant when \vec{B} is parallel to the plane of coil, are :

- (1) $\phi = 0, \varepsilon = 0$
- (2) $\phi = AB, \varepsilon = 0$
- (3) $\phi = AB, \varepsilon = NAB\omega$
- (4) $\phi = 0, \varepsilon = NAB\omega$

Answer (3)

Sol. $\phi = NBA \cos \theta$

$$\varepsilon = -\frac{d\phi}{dt} = -NBA \frac{d \cos \theta}{dt}$$

$$\theta = \omega t$$

$$\varepsilon = -NBA\omega \sin \omega t$$

if B is parallel to plane of coil


$$\theta = 90^\circ$$

$$\phi = 0, \varepsilon = BA\omega N$$


44. A body of mass ' m ' connected to a massless and unstretchable string goes in vertical circle of radius ' R ' under gravity g . The other end of the string is fixed at the center of circle. If velocity at top of circular path is $n\sqrt{gR}$, where, $n \geq 1$, then ratio of kinetic energy of the body at bottom to that at top of the circle is

- (1) $\frac{n^2 + 4}{n^2}$
- (2) $\frac{n}{n + 4}$
- (3) $\frac{n + 4}{n}$
- (4) $\frac{n^2}{n^2 + 4}$

Answer (1)




Delivering Champions Consistently




Aakash
Medical | IIT-JEE | Foundations


JEE (Advanced) 2024




AIR 25 Rishi Shekher Shukla
2 Year Classroom




AIR 67 Krishna Sai Shishir
2 Year Classroom




AIR 78 Abhishek Jain
2 Year Classroom



AIR 93 Hardik Aggarwal
2 Year Classroom



AIR 95 Ujjwal Singh
2 Year Classroom




AIR 98 Rachit Aggarwal
2 Year Classroom


JEE (Main) 2024



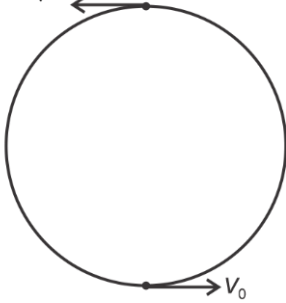
AIR 1 Sanvi Jain
2 Year Classroom



AIR 15 M Sai Divya
2 Year Classroom



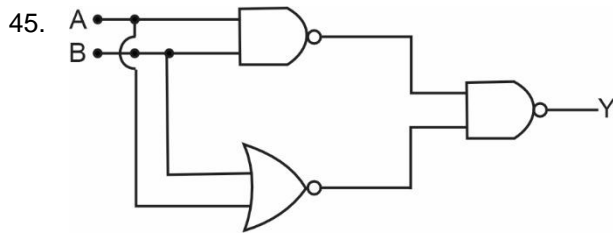
AIR 19 Rishi Shekher Shukla
2 Year Classroom

Sol. $v = n\sqrt{gR}$ 

$$v_0 = \sqrt{v^2 + 2g(2R)}$$

$$v_0 = \sqrt{n^2 gR + 4gR}$$

$$\therefore \frac{k_{\text{bottom}}}{k_{\text{top}}} = \frac{v_0^2}{v^2} = \frac{n^2 + 4}{n^2}$$



For the circuit shown above, equivalent GATE is :

- (1) AND gate
- (2) OR gate
- (3) NOT gate
- (4) NAND gate

Answer (2)

Sol. $Y = \overline{AB(A+B)}$

$$= AB + A + B$$

$$= A(B+1) + B$$

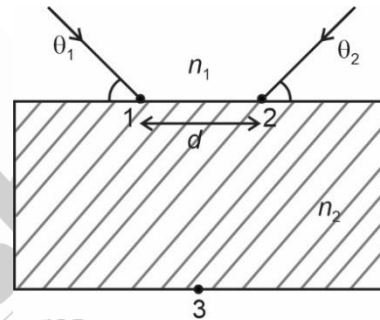
$$= A + B$$

or GATE

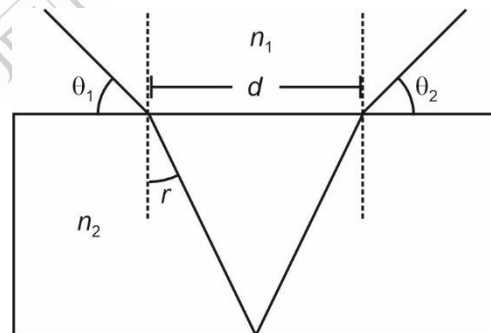
SECTION - B

Numerical Value Type Questions: This section contains 5 Numerical based questions. The answer to each question should be rounded-off to the nearest integer.

46. Two light beams fall on a transparent material block at point 1 and 2 with angle θ_1 and θ_2 , respectively, as shown in figure. After refraction, the beams intersect at point 3 which is exactly on the interface at other end of the block. Given : the distance between 1 and 2, $d = 4\sqrt{3}$ cm and $\theta_1 = \theta_2 = \cos^{-1}\left(\frac{n_2}{2n_1}\right)$, where refractive index of the block $n_2 >$ refractive index of the outside medium n_1 , then the thickness of the block is _____ cm.

**Answer (6)**

Sol.



$$n_1 \sin(90 - \theta_1) = n_2 \sin r$$

$$n_1 \times \frac{n_2}{2n_1} = n_2 \sin r$$

$$\sin r = \frac{1}{2}$$


Delivering Champions Consistently

Aakash
 Medical | IIT-JEE | Foundations
JEE (Advanced) 2024**JEE (Main) 2024**

$$r = 30^\circ$$

$$\tan r = \left(\frac{d/2}{t} \right)$$

$$t = \frac{d}{2 \tan r} = \frac{d\sqrt{3}}{2} = \frac{(4\sqrt{3})\sqrt{3}}{2}$$

$$= 6 \text{ cm}$$

47. A container of fixed volume contains a gas at 27°C . To double the pressure of the gas, the temperature of gas should be raised to _____ $^\circ\text{C}$.

Answer (327)

Sol. $V = \text{constant}$

$$\frac{P_1}{T_1} = \frac{P_2}{T_2}$$

$$P_2 = 2P_1$$

$$T_2 = 2T_1$$

$$= 2 \times 300 = 600 \text{ K}$$

$$\therefore = 327^\circ\text{C}$$

48. The maximum speed of a boat in still water is 27 km/h. Now this boat is moving downstream in a river flowing at 9 km/h. A man in the boat throws a ball vertically upwards with speed of 10 m/s. Range of the ball as observed by an observer at rest on the river bank, is _____ cm. (Take $g = 10 \text{ m/s}^2$)

Answer (2000)

Sol. $v_y = 10 \text{ m/s}$

$$v_x = v_{\text{river}} + v_{\text{boat}} = 27 + 9$$

$$= 36 \text{ km/h} = 10 \text{ m/s}$$

$$R = \left(\frac{2v_y}{g} \right) v_x = \frac{2 \times 10 \times 10}{10} = 20 \text{ m}$$

$$= 2000 \text{ cm}$$

49. In a hydraulic lift, the surface area of the input piston is 6 cm^2 and that of the output piston is 1500 cm^2 . If 100 N force is applied to the input piston to raise the output piston by 20 cm, then the work done is _____ kJ.

Answer (5)

Sol. According to Pascal's law

$$\frac{F_1}{A_1} = \frac{F_2}{A_2}$$

$$F_2 = \left(\frac{A_2}{A_1} \right) F_1 = \frac{1500}{6} \times 100 \text{ N}$$

$$W = F_2 d_2 = \frac{1500}{6} \times 100 \times \frac{20}{100}$$

$$= 5 \text{ kJ}$$

50. The coordinates of a particle with respect to origin in a given reference frame is (1, 1, 1) meters. If a force of $\vec{F} = \hat{i} - \hat{j} + \hat{k}$ acts on the particle, then the magnitude of torque (with respect to origin) in z-direction is _____.


Answer (2)

Sol. $\tau = \vec{r} \times \vec{F}$

$$\tau = \begin{vmatrix} \hat{i} & \hat{j} & \hat{k} \\ 1 & 1 & 1 \\ 1 & -1 & 1 \end{vmatrix}$$

Along \hat{k}

$$\tau_z = -2 \hat{k}$$




Delivering Champions Consistently

Aakash
Medical | IIT-JEE | Foundations


JEE (Advanced) 2024



AIR 25
Rishi Shekher Shukla
2 Year Classroom




AIR 67
Krishna Sai Shishir
2 Year Classroom




AIR 78
Abhishek Jain
2 Year Classroom



AIR 93
Hardik Aggarwal
2 Year Classroom




AIR 95
Ujjwal Singh
2 Year Classroom




AIR 98
Rachit Aggarwal
2 Year Classroom


JEE (Main) 2024



AIR 1
Sanvi Jain
2 Year Classroom



AIR 15
M Sai Divya Toja Reddy
2 Year Classroom



AIR 19
Rishi Shekher Shukla
2 Year Classroom

CHEMISTRY

SECTION - A

Multiple Choice Questions: This section contains 20 multiple choice questions. Each question has 4 choices (1), (2), (3) and (4), out of which **ONLY ONE** is correct.

Choose the correct answer :

51. For a $\text{Mg}|\text{Mg}^{2+}(\text{aq})||\text{Ag}^{+}(\text{aq})|\text{Ag}$ the correct Nernst equation is :

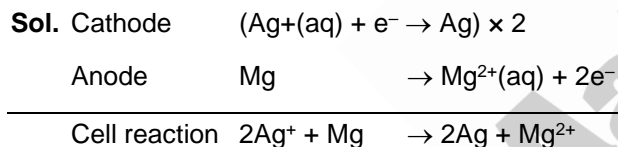
(1) $E_{\text{cell}} = E_{\text{cell}}^{\circ} + \frac{RT}{2F} \ln \frac{[\text{Ag}^{+}]^2}{[\text{Mg}^{2+}]}$

(2) $E_{\text{cell}} = E_{\text{cell}}^{\circ} - \frac{RT}{2F} \ln \frac{[\text{Ag}^{+}]^2}{[\text{Mg}^{2+}]}$

(3) $E_{\text{cell}} = E_{\text{cell}}^{\circ} - \frac{RT}{2F} \ln \frac{[\text{Ag}^{+}]}{[\text{Mg}^{2+}]}$

(4) $E_{\text{cell}} = E_{\text{cell}}^{\circ} - \frac{RT}{2F} \ln \frac{[\text{Mg}^{2+}]}{[\text{Ag}^{+}]}$

Answer (1)



$$Q = \frac{[\text{Mg}^{2+}]}{[\text{Ag}^{+}]^2}$$

By Nernst equation

$$E_{\text{cell}} = E_{\text{cell}}^{\circ} - \frac{RT}{nF} \ln Q$$

$$E_{\text{cell}} = E_{\text{cell}}^{\circ} - \frac{RT}{nF} \ln \frac{[\text{Mg}^{2+}]}{[\text{Ag}^{+}]^2}$$

$$= E_{\text{cell}}^{\circ} + \frac{RT}{2F} \ln \frac{[\text{Ag}^{+}]^2}{[\text{Mg}^{2+}]}$$

52. 1.24 g of AX_2 (molar mass 124 g mol^{-1}) is dissolved in 1 kg of water to form a solution with boiling point of 100.0156°C , while 25.4 g of AY_2 (molar mass 250 g mol^{-1}) in 2 kg of water constitutes a solution with a boiling point of 100.0260°C .

$$K_b(\text{H}_2\text{O}) = 0.52 \text{ K kg mol}^{-1}$$

Which of the following is **correct** ?

- (1) AX_2 and AY_2 (both) are fully ionised
- (2) AX_2 is fully ionised while AY_2 is completely unionised
- (3) AX_2 and AY_2 (both) are completely unionised
- (4) AX_2 is completely unionised while AY_2 is fully ionised

Answer (2)

Sol. For AX_2

$$\Delta T_b = i K_b m$$

$$0.0156 = i \times 0.52 \times \frac{1.24}{124 \times 1}$$

$$3 = i$$

$$3 = 1 + 2\alpha$$

$$1 = \alpha$$

For AY_2

$$\Delta T_b = i K_b m$$

$$0.0260 = i \times 0.52 \times \frac{25.4}{250 \times 2}$$

$$i \approx 1$$

$\therefore \text{AX}_2$ is completely ionised & AY_2 is completely unionised



Delivering Champions Consistently



Medical | IIT-JEE | Foundations

JEE (Advanced) 2024



AIR 25

Rishi Shekher Shukla
2 Year Classroom



AIR 67

Krishna Sai Shishir
2 Year Classroom



AIR 78

Abhishek Jain
2 Year Classroom



AIR 93

Harshik Aggarwal
2 Year Classroom



AIR 95

Ujjwal Singh
2 Year Classroom



AIR 98

Rachit Aggarwal
2 Year Classroom

JEE (Main) 2024



AIR 1

Sanvi Jain
2 Year Classroom

Telangana Topper



AIR 15

M Sai Divya Teja Reddy
2 Year Classroom

Telangana Topper



AIR 19

Rishi Shekher Shukla
2 Year Classroom

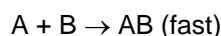
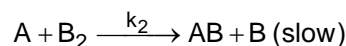
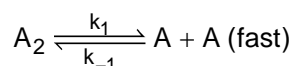
53. The standard reduction potential values of some of the p-block ions are given below. Predict the one with the strongest oxidising capacity.

- (1) $E_{\text{Al}^{3+}/\text{Al}}^{\ominus} = -1.66 \text{ V}$
- (2) $E_{\text{Sn}^{4+}/\text{Sn}^{2+}}^{\ominus} = +1.15 \text{ V}$
- (3) $E_{\text{Tl}^{3+}/\text{Tl}}^{\ominus} = +1.26 \text{ V}$
- (4) $E_{\text{Pb}^{4+}/\text{Pb}^{2+}}^{\ominus} = +1.67 \text{ V}$

Answer (4)

Sol. The element having strongest oxidising capacity will have highest value of standard reduction potential

54. The reaction $\text{A}_2 + \text{B}_2 \rightarrow 2\text{AB}$ follows the mechanism



The overall order of the reaction is :

- (1) 1.5
- (2) 2.5
- (3) 3
- (4) 2

Answer (1)

Sol. Since, second step is slow step

$$r = k_2[\text{A}][\text{B}_2] \quad \dots(\text{i})$$

$$\text{Also, } \frac{k_1}{k_{-1}} = \frac{[\text{A}]^2}{[\text{A}_2]}$$

$$[\text{A}] = \left(\frac{[\text{A}_2]k_1}{k_{-1}} \right)^{\frac{1}{2}} \quad \dots(\text{ii})$$

$$r = k_2 \left(\frac{k_1}{k_{-1}} \right)^{\frac{1}{2}} [\text{A}_2]^{\frac{1}{2}} [\text{B}_2]$$

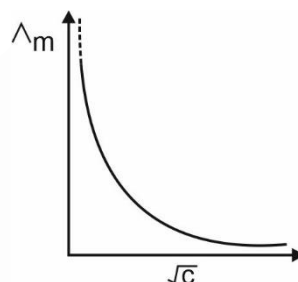
$$\text{order} = \frac{1}{2} + 1 = \frac{3}{2}$$

55. The molar conductivity of a weak electrolyte when plotted against the square root of its concentration, which of the following is expected to be observed?

- (1) A small increase in molar conductivity is observed at infinite dilution
- (2) Molar conductivity increases sharply with increase in concentration
- (3) A small decrease in molar conductivity is observed at infinite dilution
- (4) Molar conductivity decreases sharply with increase in concentration.

Answer (4)

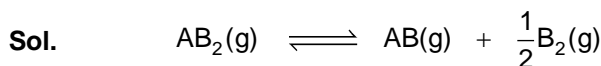
Sol. For weak electrolyte, variation of \wedge_m with \sqrt{c} is



56. At temperature T, compound $\text{AB}_2(\text{g})$ dissociates as $\text{AB}_2(\text{g}) \rightleftharpoons \text{AB}(\text{g}) + \frac{1}{2}\text{B}_2(\text{g})$ having degree of dissociation x (small compared to unity). The correct expression for x in terms of K_p and p is

- (1) $\sqrt[3]{\frac{2K_p^2}{p}}$
- (2) $\sqrt[3]{\frac{2K_p}{p}}$
- (3) $\sqrt[4]{\frac{2K_p}{p}}$
- (4) $\sqrt{K_p}$

Answer (1)



$$t = 0 \quad p_0$$

$$t = t_{\text{eq}} \quad p_0(1-x) \quad p_0x \quad \frac{p_0x}{2}$$

$$p = p_0x - p_0x + p_0x + \frac{p_0x}{2}$$

Delivering Champions Consistently

Aakash
Medical | IIT-JEE | Foundations

JEE (Advanced) 2024

AIR 25 Rishi Shekher Shukla
2 Year Classroom

AIR 67 Krishna Sai Shishir
2 Year Classroom

AIR 78 Abhishek Jain
2 Year Classroom

AIR 93 Harsh Aggarwal
2 Year Classroom

AIR 95 Ujjwal Singh
2 Year Classroom

AIR 98 Rachit Aggarwal
2 Year Classroom

JEE (Main) 2024

AIR 1 Sanvi Jain
Karnataka Topper
100 Percentile

AIR 15 M Sai Divya Teja Reddy
Telangana Topper
100 Percentile

AIR 19 Rishi Shekher Shukla
Telangana Topper
100 Percentile

$$p = p_0 \left(1 + \frac{x}{2} \right)$$

$$p_0 = \frac{p}{\left(1 + \frac{x}{2} \right)}$$

$$K_p = \frac{(p_{AB})(p_{B_2})^{1/2}}{(p_{AB_2})}$$

$$K_p = \frac{(p_0 x) \left(\frac{p_0 x}{2} \right)^{1/2}}{p_0 (1-x)}$$

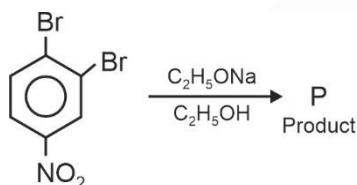
$$K_p = \frac{px}{\left(1 + \frac{x}{2} \right) \left(\frac{p}{1 + \frac{x}{2}} \times \frac{x}{2} \right)^{1/2}}$$

Since $x \ll 1$

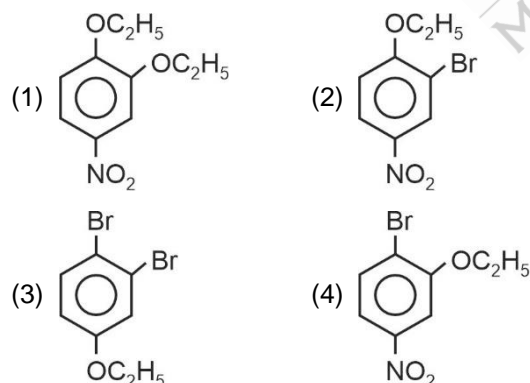
$$K_p = \frac{p^{1/2} x^{3/2}}{2^{1/2}}$$

$$x = \sqrt[3]{\frac{2K_p^2}{p}}$$

57. In the following substitution reaction :

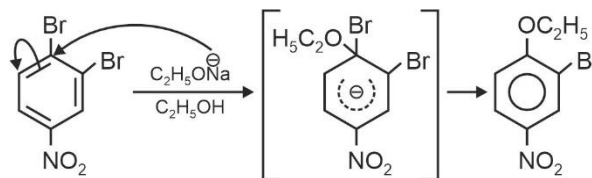


Product 'P' formed is

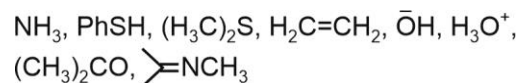


Answer (2)

Sol. Br at the para of NO_2 will undergo aromatic nucleophilic substitution by nucleophile $\text{C}_2\text{H}_5\text{ONa}$.



58. Total number of nucleophiles from the following is



- (1) 4 (2) 7
(3) 5 (4) 6

Answer (3)

Sol. Any specie having electrons available for donation can act as nucleophile.

Total 5 are present.

59. Choose the **correct** statements :

- (A) Weight of a substance is the amount of matter present in it.
(B) Mass is the force exerted by gravity on an object.
(C) Volume is the amount of space occupied by a substance.
(D) Temperatures below 0°C are possible in Celsius scale, but in Kelvin scale negative temperature is not possible.
(E) Precision refers to the closeness of various measurements for the same quantity.

Choose the **correct** answer from the options given below.

- (1) (A), (B) and (C) only (2) (A), (D) and (E) only
(3) (C), (D) and (E) only (4) (B), (C) and (D) only



Delivering Champions Consistently



Medical | IIT-JEE | Foundations

JEE (Advanced) 2024



AIR 25
Rishi Shekher Shukla
2 Year Classroom



AIR 67
Krishna Sai Shishir
2 Year Classroom



AIR 78
Abhishek Jain
2 Year Classroom



AIR 93
Harsh Aggarwal
2 Year Classroom



AIR 95
Ujjwal Singh
2 Year Classroom



AIR 98
Rishit Aggarwal
2 Year Classroom

JEE (Main) 2024



AIR 1
Sanvi Jain
2 Year Classroom

Telangana Topper



AIR 15
M Sai Divya Teja Reddy
2 Year Classroom

Telangana Topper



AIR 19
Rishi Shekher Shukla
2 Year Classroom

Answer (3)

Sol. Mass of substance is amount of matter present in it. Weight is force exerted by gravity on object.

60. Match **List-I** with **List-II**.

List-I (Carbohydrate)	List-II (Linkage Source)
(A) Amylose	(I) β -C ₁ -C ₄ , plant
(B) Cellulose	(II) α -C ₁ -C ₄ , animal
(C) Glycogen	(III) α -C ₁ -C ₄ , α -C ₁ -C ₆ , plant
(D) Amylopectin	(IV) α -C ₁ -C ₄ , plant

Choose the **correct** answer from the options given below.

- (1) (A)-(IV), (B)-(I), (C)-(III), (D)-(II)
 (2) (A)-(II), (B)-(III), (C)-(I), (D)-(IV)
 (3) (A)-(III), (B)-(II), (C)-(I), (D)-(IV)
 (4) (A)-(IV), (B)-(I), (C)-(II), (D)-(III)

Answer (4)

Sol. Amylose \Rightarrow It is a plant based starch it has α -C₁-C₄ glycosidic linkage.

Cellulose \Rightarrow It has β -C₁-C₄ glycosidic linkage

Glycogen \Rightarrow It has α -C₁-C₄ and glycosidic linkage (animal starch)

Amylopectin \Rightarrow It is a plant based with α -C₁-C₄ and C₁-C₆ glycosidic linkage

61. If a_0 is denoted as the Bohr radius of hydrogen atom, then what is the de-Broglie wavelength (λ) of the electron present in the second orbit of hydrogen atom? [n : any integer]

- (1) $\frac{2a_0}{n\pi}$ (2) $\frac{4n}{\pi a_0}$
 (3) $\frac{4\pi a_0}{n}$ (4) $\frac{8\pi a_0}{n}$

Answer (4)

Sol. $r_n = \frac{a_0 n^2}{Z}$

Also, $2\pi r_n = n\lambda$

Where λ is de-Broglie wavelength

$$\frac{2\pi a_0 n^2}{Z} = n\lambda$$

For second orbit of H-atom

$$\lambda = \frac{8\pi a_0}{n}$$

62. Match **List - I** with **List - II**.

List - I (Complex)	List - II (Hybridisation & Magnetic characters)
(A) $[\text{MnBr}_4]^{2-}$	(I) d^2sp^3 & diamagnetic
(B) $[\text{FeF}_6]^{3-}$	(II) sp^3d^2 & paramagnetic
(C) $[\text{Co}(\text{C}_2\text{O}_4)_3]^{3-}$	(III) sp^3 & diamagnetic
(D) $[\text{Ni}(\text{CO})_4]$	(IV) sp^3 & paramagnetic

Choose the **correct** answer from the options given below :

- (1) (A)-(IV), (B)-(II), (C)-(I), (D)-(III)
 (2) (A)-(III), (B)-(I), (C)-(II), (D)-(IV)
 (3) (A)-(IV), (B)-(I), (C)-(II), (D)-(III)
 (4) (A)-(III), (B)-(II), (C)-(I), (D)-(IV)

Answer (1)

Sol. $[\text{MnBr}_4]^{2-}$

Mn^{2+} , Br^- is WFL

d^5 , so it is sp^3 and paramagnetic.

$[\text{FeF}_6]^{3-}$

Fe^{3+} , F^- is WFL

d^5 , so it is sp^3d^2 and paramagnetic.



Delivering Champions Consistently



Aakash
Medical | IIT-JEE | Foundations

JEE (Advanced) 2024



AIR 25
Rishi Shekher Shukla
2 Year Classroom

AIR 67
Krishna Sai Shishir
2 Year Classroom

AIR 78
Abhishek Jain
2 Year Classroom

AIR 93
Harsh Aggarwal
2 Year Classroom

AIR 95
Ujjwal Singh
2 Year Classroom

AIR 98
Rishabh Aggarwal
2 Year Classroom

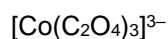
JEE (Main) 2024



AIR 1
Sanvi Jain
2 Year Classroom

AIR 15
M Sai Divya Teja Reddy
2 Year Classroom

AIR 19
Rishi Shekher Shukla
2 Year Classroom



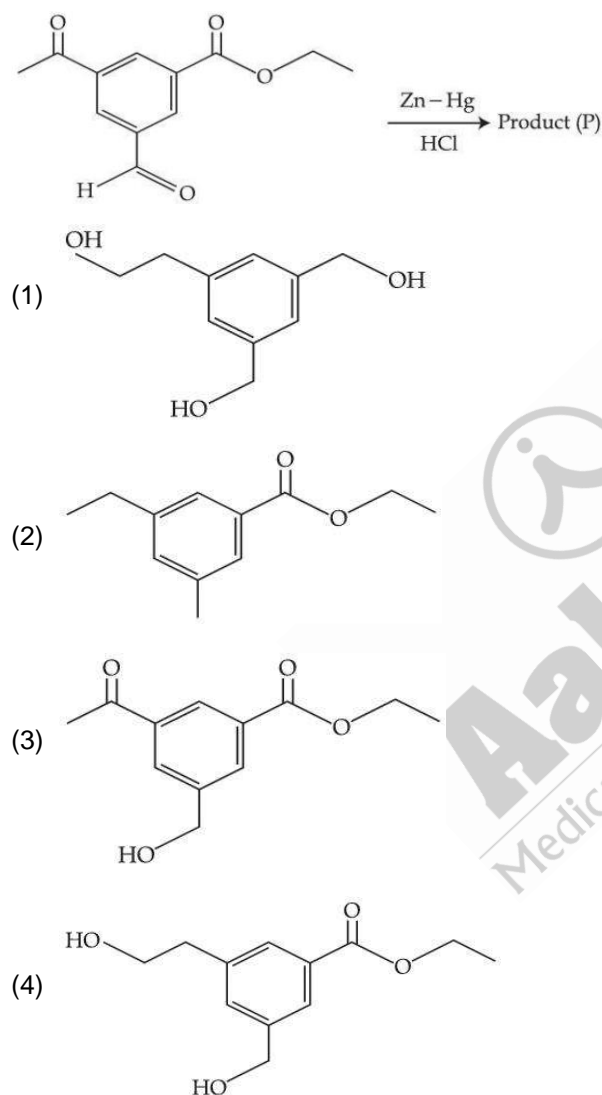
Co^{3+} , $\text{C}_2\text{O}_4^{2-}$ is a SFL

d^6 , so it is d^2sp^3 and diamagnetic.

$[\text{Ni}(\text{CO})_4]$, CO is a SFL

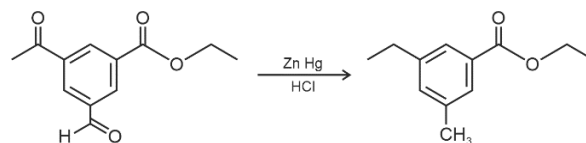
d^{10} , it is sp^3 and diamagnetic.

63. The product (P) formed in the following reaction is:



Answer (2)

Sol. It is Clemmensen reduction, it will not reduce ester,



Ester cannot be reduced by clemmensen reduction

64. The correct increasing order of stability of the complexes based on Δ_0 value is:

- | | |
|--------------------------------------|-------------------------------------|
| I. $[\text{Mn}(\text{CN})_6]^{3-}$ | II. $[\text{Co}(\text{CN})_6]^{4-}$ |
| III. $[\text{Fe}(\text{CN})_6]^{4-}$ | IV. $[\text{Fe}(\text{CN})_6]^{3-}$ |
| (1) III < II < IV < I | (2) II < III < I < IV |
| (3) IV < III < II < I | (4) I < II < IV < III |

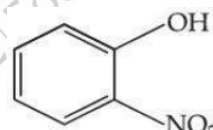
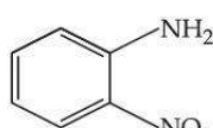
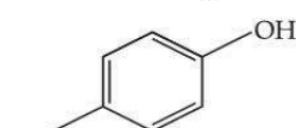
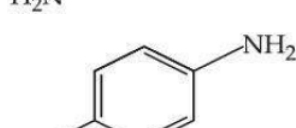
Answer (4)

Sol. Neglecting pairing energy

- $[\text{Mn}(\text{CN})_6]^{3-} \Rightarrow \text{Mn}^{3+}, t_{2g}^4$, CFSE = $-0.4 \times 4 \Delta_0 = -1.6\Delta_0$
- $[\text{Co}(\text{CN})_6]^{4-} \Rightarrow \text{Co}^{2+}, t_{2g}^6 e_g^1$, CFSE = $-0.4 \times 6 + 0.6 \times 1 = -1.8\Delta_0$
- $[\text{Fe}(\text{CN})_6]^{4-} \Rightarrow \text{Fe}^{2+}, t_{2g}^6 e_g^0$, CFSE = $-0.4 \times 6 = -2.4\Delta_0$
- $[\text{Fe}(\text{CN})_6]^{3-} \Rightarrow \text{Fe}^{3+}, t_{2g}^5 e_g^0$, CFSE = $-0.4 \times 5 = -2\Delta_0$

Order of stability III > IV > II > I

65. The steam volatile compounds among the following are :

- (A) 
- (B) 
- (C) 
- (D) 



Delivering Champions Consistently



Medical | IIT-JEE | Foundations

JEE (Advanced) 2024



AIR 25

Rishi Shekher Shukla
2 Year Classroom

JEE (Main) 2024



AIR 67

Krishna Sai Shishir
2 Year Classroom

JEE (Main) 2024



AIR 78

Abhishek Jain
2 Year Classroom

JEE (Main) 2024



AIR 93

Harsh Aggarwal
2 Year Classroom

JEE (Main) 2024



AIR 95

Ujjwal Singh
2 Year Classroom

JEE (Main) 2024



AIR 98

Rachit Aggarwal
2 Year Classroom

JEE (Main) 2024



AIR 1

Sanvi Jain
2 Year Classroom

JEE (Main) 2024



AIR 15

M Sai Divya Teja Reddy
2 Year Classroom

JEE (Main) 2024



AIR 19

Rishi Shekher Shukla
2 Year Classroom

Choose the **correct** answer from the options given below :

- (1) (B) and (D) Only
- (2) (A) and (C) Only
- (3) (A), (B) and (C) Only
- (4) (A) and (B) Only

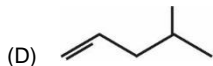
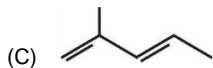
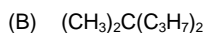
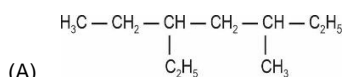
Answer (4)

Sol. Ortho nitro phenol and ortho nitro aniline will be steam volatile as they will show intra molecular H-bonding.

66. Match List I with List-II

List-I

(Structure)



List-II

(IUPAC Name)

(I) 4-Methylpent-1-ene

(II) 3-Ethyl-5-methylheptane

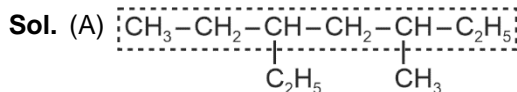
(III) 4, 4-Dimethylheptane

(IV) 2-Methyl-1, 3-pentadiene

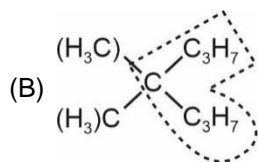
Choose the correct answer from the options given below

- (1) (A)-(II), (B)-(III), (C)-(I), (D)-(IV)
- (2) (A)-(II), (B)-(III), (C)-(IV), (D)-(I)
- (3) (A)-(III), (B)-(II), (C)-(IV), (D)-(I)
- (4) (A)-(III), (B)-(II), (C)-(I), (D)-(IV)

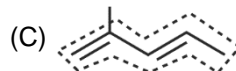
Answer (2)



3-Ethyl-5-methylheptane



4,4-Dimethylheptane



2-Methyl-1,3-pentadiene



4-Methylpent-1-ene

67. 500 J of energy is transferred as heat to 0.5 mol of Argon gas at 298 K and 1.00 atm. The final temperature and the change in internal energy respectively are: Given: $R = 8.3 \text{ JK}^{-1} \text{ mol}^{-1}$

- (1) 378 K and 500 J
- (2) 368 K and 500 J
- (3) 378 K and 300 J
- (4) 348 K and 300 J

Answer (4)

Sol. At cons. P

$$Q = nC_p \Delta T$$

$$500 = 0.5 \times \frac{5}{2} \times 8.3 (T_f - 298)$$

$$346.2 \text{ K} = T_f$$

$$\Delta U = nC_v \Delta T$$

$$= \frac{1}{2} \times \frac{3}{2} \times 8.3 \times (346.2 - 298)$$

$$= 300 \text{ J}$$

68. The correct option with order of melting points of the pairs (Mn, Fe), (Tc, Ru) and (Re, Os) is:

- (1) $\text{Fe} < \text{Mn}$, $\text{Ru} < \text{Tc}$ and $\text{Re} < \text{Os}$
- (2) $\text{Mn} < \text{Fe}$, $\text{Tc} < \text{Ru}$ and $\text{Os} < \text{Re}$
- (3) $\text{Fe} < \text{Mn}$, $\text{Ru} < \text{Tc}$ and $\text{Os} < \text{Re}$
- (4) $\text{Mn} < \text{Fe}$, $\text{Tc} < \text{Ru}$ and $\text{Re} < \text{Os}$

Answer (2)

Sol. Melting point order

$$\text{Fe} > \text{Mn}$$

$$\text{Ru} > \text{Tc}$$

$$\text{Re} > \text{Os}$$

Delivering Champions Consistently

Aakash
Medical | IIT-JEE | Foundations

JEE (Advanced) 2024

JEE (Main) 2024

69. An element 'E' has the ionisation enthalpy value of 374 kJ mol^{-1} . 'E' reacts with elements A, B, C and D with electron gain enthalpy values of -328 , -349 , -325 and -295 kJ mol^{-1} , respectively. The correct order of the products EA, EB, EC and ED in terms of ionic character is:

- (1) $ED > EC > EA > EB$ (2) $EA > EB > EC > ED$
 (3) $EB > EA > EC > ED$ (4) $ED > EC > EB > EA$

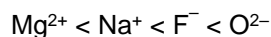
Answer (3)

Sol. The element having high value of Electron gain enthalpy (magnitude) will form a compound having higher ionic character so order of ionic character

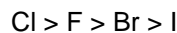
$$EB > EA > EC > ED$$

70. Given below are two statements :

Statement (I) : The radii of isoelectronic species increases in the order.



Statement (II) : The magnitude of electron gain enthalpy of halogen decreases in the order.



In the light of the above statements, choose the **most appropriate answer** from the options given below:

- (1) **Statement I** is correct but **Statement II** is incorrect
 (2) Both **Statement I** and **Statement II** are correct
 (3) **Statement I** is incorrect but **Statement II** is correct
 (4) Both **Statement I** and **Statement II** are incorrect

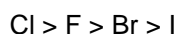
Answer (2)

Sol. $r \propto q^-$ (for isoelectronic species)

$$\propto \frac{1}{q^+}$$

\therefore Statement I is correct

Magnitude of electron gain enthalpy



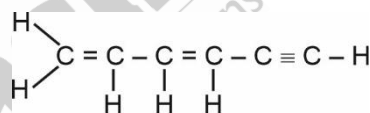
SECTION - B

Numerical Value Type Questions: This section contains 5 Numerical based questions. The answer to each question should be rounded-off to the nearest integer.

71. The sum of sigma (σ) and pi (π) bonds in Hex-1, 3-dien-5-yne is _____.

Answer (15)

Sol.



Hex-1, 3-dien-5-yne

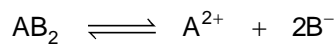
No. of π bond = 4

No. of σ bond = 11

72. If A_2B is 30% ionised in an aqueous solution, then the value of van't Hoff factor (i) is _____ $\times 10^{-1}$.

Answer (16)

Sol.



1	0	0
$1 - \alpha$	α	2α

$$i = 1 + 2\alpha$$

$$= 1 + 2 \times (0.3)$$

$$= 1.6$$

$$= 16 \times 10^{-1}$$



Delivering Champions Consistently



Medical | IIT-JEE | Foundations

JEE (Advanced) 2024



AIR 25
Rishi Shekher Shukla
2 Year Classroom



AIR 67
Krishna Sai Shishir
2 Year Classroom



AIR 78
Abhishek Jain
2 Year Classroom



AIR 93
Harsh Aggarwal
2 Year Classroom



AIR 95
Ujjwal Singh
2 Year Classroom



AIR 98
Rashit Aggarwal
2 Year Classroom

JEE (Main) 2024



AIR 1
Sanvi Jain
2 Year Classroom

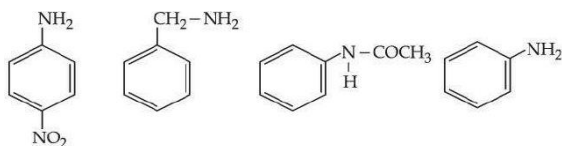


AIR 15
M Sai Divya Teja Reddy
2 Year Classroom



AIR 19
Rishi Shekher Shukla
2 Year Classroom

73. Given below are some nitrogen containing compounds

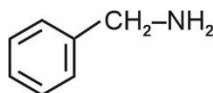


Each of them is treated with HCl separately, 1.0 g of the most basic compound will consume _____ mg of HCl.

(Given molar mass in g mol^{-1} C : 12, H : 1, O : 16, Cl : 35.5)

Answer (341)

Sol. The most basic compound will be aliphatic amine due to localised electrons



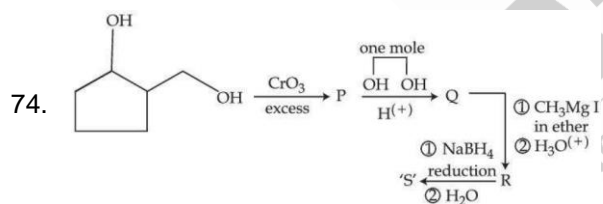
1 mole of this will consume 1 mole HCl

So mass of HCl consumed for 1 g of this compound

$$= \frac{1}{107} \times 36.5$$

$$= 0.341 \text{ gm}$$

$$= 341 \text{ mg}$$

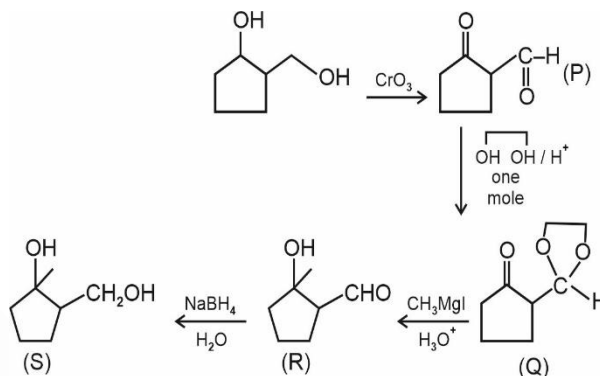


0.1 mole of compound 'S' will weight _____ g.

(Given molar mass in g mol^{-1} C : 12, H : 1, O : 16)

Answer (13)

Sol.



$$\text{mass of 0.1 mole (S)} = 0.1(84 + 32 + 14)$$

$$= 13 \text{ g}$$

75. The molar mass of the water insoluble product formed from the fusion of chromite ore (FeCr_2O_4), with Na_2CO_3 in presence of O_2 is _____ g mol^{-1} .

Answer (160)

Sol. $\text{FeCr}_2\text{O}_4 + \text{Na}_2\text{CO}_3 + \text{O}_2 \rightarrow \text{Na}_2\text{CrO}_4 + \text{Fe}_2\text{O}_3 + \text{CO}_2$

Insoluble product will be Fe_2O_3

$$\text{molar mass} = 56 \times 2 + 16 \times 3$$

$$= 112 + 48$$

$$= 160$$

□ □ □

Delivering Champions Consistently

JEE (Advanced) 2024

AIR 25 Rishi Shekher Shukla 2 Year Classroom	AIR 67 Krishna Sai Shishir 2 Year Classroom	AIR 78 Abhishek Jain 2 Year Classroom	AIR 93 Harsh Aggarwal 2 Year Classroom	AIR 95 Ujjwal Singh 2 Year Classroom	AIR 98 Rachit Aggarwal 2 Year Classroom
---	--	--	---	---	--

JEE (Main) 2024

Karnataka Topper AIR 1 Sanvi Jain 2 Year Classroom	Telangana Topper AIR 15 M Sai Divya Teja Reddy 2 Year Classroom	Telangana Topper AIR 19 Rishi Shekher Shukla 2 Year Classroom
---	--	--