

06/04/2026

Morning



Aakash

Medical | IIT-JEE | Foundations

Corporate Office : AESL, 3rd Floor, Incuspaze Campus-2, Plot-13, Sector-18, Udyog Vihar,
Gurugram, Haryana-122015

Memory Based Answers & Solutions

Time : 3 hrs.

for

M.M. : 300

JEE (Main)-2026 (Online) Phase-2

(Physics, Chemistry and Mathematics)

Don't guess your JEE Main score.

Calculate it Instantly

with our

JEE Main Score Calculator.

HOW TO GET YOUR SCORES

- Open your response sheet on the JEE Main Site
- Copy the link from the browser's Address bar
- Paste it into the required field in the Calculator



jee-marks-calculator.aakash.ac.in/



Scan the QR code
to know more.

Our Problem *Solvers* shine bright in **JEE 2025**

JEE (Advanced)

ADVAY
MAYANK
AIR 36



RUJUL
GARG
AIR 41



ARUSH
ANAND
AIR 64



SHREYAS
LOHIYA
AIR 6
Uttar Pradesh Topper
100 Overall



KUSHAGRA
BAINGAHA
AIR 7
Uttar Pradesh Topper
100 Overall



HARSSH
A GUPTA
AIR 15
Telangana Topper
100 Overall



PHYSICS

SECTION - A

Multiple Choice Questions: This section contains 20 multiple choice questions. Each question has 4 choices (1), (2), (3) and (4), out of which **ONLY ONE** is correct.

Choose the correct answer:

1. In AC series circuit supply voltage $V_{(rms)} = 100$ volts; $R = 80 \Omega$; $X_L = 80 \Omega$ and source frequency is $f = 50$ Hz. Find the power factor

- (1) $\frac{1}{\sqrt{2}}$ (2) $\frac{1}{2}$
 (3) $\frac{3}{4}$ (4) $\frac{\sqrt{3}}{2}$

Answer (1)

Sol. $z = \sqrt{R^2 + X_L^2} = 80\sqrt{2}$

$\cos\theta = \frac{R}{z} = \frac{1}{\sqrt{2}}$

2. An expression of potential energy $= \frac{A\sqrt{x}}{B+x}$ is given. Then dimensions of $(A \cdot B)$ will be. (x is position here)

- (1) MLT^{-1} (2) $M^{1/2}L^{2/3}T^{-2}$
 (3) $ML^{3.5}T^{-2}$ (4) $ML^{1/2}T^{-2}$

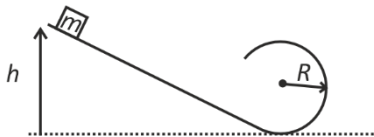
Answer (3)

Sol. $[B] = [L]$

$A\sqrt{L} = UL$

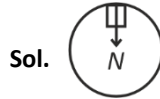
$[A] = ML^2T^{-2} \frac{L}{L^{1/2}} = [ML^{2.5}T^{-2}]$

3. A block of mass m is released from height h on smooth plane. If normal force on top of the circular part is $3mg$. Find h .



- (1) $5R$ (2) $4R$
 (3) $3.5R$ (4) $3R$

Answer (2)



$N + mg = \frac{mv^2}{R}$

$v^2 = 4gR$

$mg(h - 2R) = \frac{1}{2}m \times 4gR$

$h - 2R = 2R$

$h = 4R$

4. Electric field at centre of semi-circular ring of radius 10 cm is 100 v/m. Find charge on the ring if charge distribution is uniform.

- (1) $4\epsilon_0$
 (2) $20\epsilon_0$
 (3) $25\epsilon_0$
 (4) $30\epsilon_0$

Answer (2)

Sol. $E = \frac{\lambda}{2\pi\epsilon_0 R}$

$= \frac{Q}{2\pi\epsilon_0 R \cdot \pi R}$

$Q = E 2\pi^2 R^2 \epsilon_0$

$= 100 \times 2 \times 10 \times 10^{-2} \epsilon_0$

$= 20 \epsilon_0$

Our Problem *Solvers* shine bright in **JEE 2025**

JEE (Advanced)

ADVAY MAYANK AIR 36 RUJUL GARG AIR 41 ARUSH ANAND AIR 64

JEE (MAIN)

SHREYAS LOHIYA AIR 6 Uttar Pradesh Topper 100 KUSHAGRA BAINGAHA AIR 7 Uttar Pradesh Topper 100 HARSSH A GUPTA AIR 15 Telangana Topper 100

5. A point charge particle $Q = 3C$ is placed at point $A(0, -2, -5)$ and taken to point $B(2, 1, 3)$ in the electric field $\vec{E} = (2x\hat{i} + 3y^2\hat{j} + 4z\hat{k})$. Find work done by electric field.
- (1) 75 Joule (2) 135 Joule
 (3) 89 Joule (4) 105 Joule

Answer (2)

Sol. So $\Delta w = \int q\vec{E} \cdot d\vec{r}$

$$\Rightarrow \Delta w = q \int (2x\hat{i} + 3y^2\hat{j} + 4z\hat{k}) \cdot (dx\hat{i} + dy\hat{j} + dz\hat{k})$$

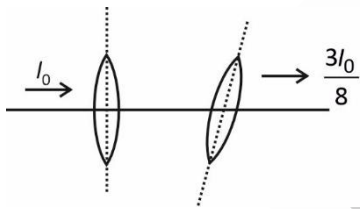
$$\Rightarrow \Delta w = q \int (2xdx + 3y^2dy + 4dz)$$

$$\Rightarrow \Delta w = q \int x^2 + y^3 + 4z \Big|_{x_1y_1z_1}^{x_2y_2z_2}$$

$$\Rightarrow \Delta w = 3[(4 + 1 + 12) - (0 - 8 - 20)]$$

$$\Rightarrow \Delta w = 3(45) = 135 \text{ J}$$

6. Unpolarized light with intensity I_0 incident on polariser. Find angle between axis of polariser and analyser, so that intensity of emergent light is $\frac{3I_0}{8}$



- (1) 45° (2) 60°
 (3) 37° (4) 30°

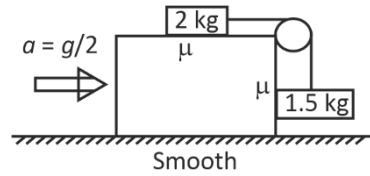
Answer (4)

Sol. $I_{out} = \frac{I_0}{2} \cos^2 \theta$

$$\cos^2 \theta = \frac{3}{4}$$

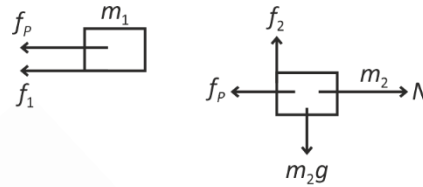
$$\cos \theta = \frac{\sqrt{3}}{2}$$

7. Find the least value of μ such that system move together without slipping.



- (1) $\frac{2}{11}$ (2) $\frac{3}{2}$
 (3) $\frac{1}{7}$ (4) $\frac{5}{7}$

Answer (1)



Sol.

$$m_2g = \mu \frac{m_2g}{2} + \frac{m_1g}{2} + \mu m_1g$$

$$1.5 = \mu \times 0.75 + 1 + \mu \times 2$$

$$0.5 = 2.75\mu$$

$$\mu = \frac{0.5}{2.75} = \frac{2}{11}$$

8. A small cubical region of side 1 mm is placed at the center of current $I = 1A$ carrying circular loop of radius $a = 1 \text{ m}$. Find magnetic energy stored in the cube.

- (1) $\pi \times 10^{-15} \text{ Joule}$ (2) $\Delta u = \frac{\pi}{2} \times 10^{-16} \text{ Joule}$
 (3) $2\pi \times 10^{-16} \text{ Joule}$ (4) $\Delta u = 2\pi \times 10^{-15} \text{ Joule}$

Answer (2)

Sol. Energy density = $\frac{\beta^2}{2\mu_0}$

$$\text{Here } \beta = \frac{\mu_0 I}{2a}$$

$$\text{So } \Delta u = \left(\frac{\mu_0 I}{2a}\right)^2 \cdot \frac{1}{2\mu_0} \cdot 1 \times 10^{-9}$$

Our Problem Solvers shine bright in **JEE 2025**

JEE (Advanced)

ADVAY
MAYANK
AIR 36



RUJUL
GARG
AIR 41



ARUSH
ANAND
AIR 64



SHREYAS
LOHIYA
AIR 6
Uttar Pradesh Topper
100



KUSHAGRA
BAINGAHA
AIR 7
Uttar Pradesh Topper
100



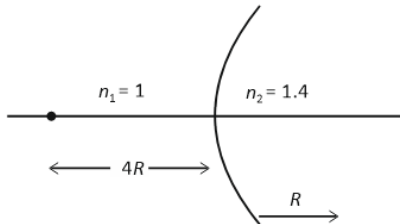
HARSSH
A GUPTA
AIR 15
Telangana Topper
100



$$\Rightarrow \Delta u = \frac{1 \times 10^{-9}}{4 \times 2} \frac{\mu_0^2}{\mu_0} = \frac{4\pi \times 10^{-7} \times 10^{-9}}{8}$$

$$\Rightarrow \Delta u = \frac{\pi}{2} \times 10^{-16} \text{ Joule}$$

9. A spherical refracting surface separating the media with refractive index $n_1 = 1$ and $n_2 = 1.4$ as shown. Object is placed at $4R$ from surface and R is curvature radius as shown.



Find magnitude of magnification.

(1) $|m| = \frac{5}{3}$ (2) $|m| = \frac{4}{3}$

(3) $|m| = \frac{3}{5}$ (4) $|m| = \frac{3}{4}$

Answer (1)

Sol. $\frac{n_2}{v} - \frac{n_1}{u} = \frac{(n_2 - n_1)}{R}$

$$\Rightarrow \frac{1.4}{v} + \frac{1}{4R} = \frac{0.4}{R}$$

$$\Rightarrow \frac{1.4}{v} = \frac{1}{R} \left(\frac{2}{5} - \frac{1}{4} \right) = \frac{3}{20R}$$

$$\Rightarrow v = \frac{1.4 \times 20R}{3}$$

So $|m| = \left| \frac{n_1 v}{n_2 u} \right| = \frac{1 \times 1.4 \times 20R}{3 \times 1.4 \times 4R}$

$$(m) = \frac{5}{3}$$

10. Ratio of wavelengths of 1st and 2nd line of Balmer series in hydrogen atom spectra is

(1) $\frac{11}{13}$ (2) $\frac{15}{28}$

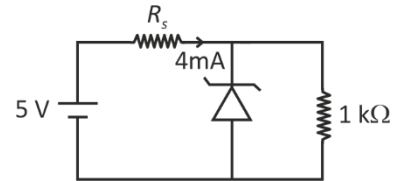
(3) $\frac{20}{27}$ (4) $\frac{13}{17}$

Answer (3)

Sol. $\frac{\lambda_2}{\lambda_1} = \frac{\left(\frac{1}{4} - \frac{1}{9} \right)}{\left(\frac{1}{4} - \frac{1}{16} \right)} = \frac{5 \times 64}{36 \times 12}$

$$= \frac{5 \times 4}{9 \times 3} = \frac{20}{27}$$

11. Power drawn by resistance $1 \text{ k}\Omega$ is 4 mW . Find value of R_s .



- (1) $2 \text{ k}\Omega$ (2) 500Ω
(3) $1 \text{ k}\Omega$ (4) 750Ω

Answer (4)

Sol. $i_L = 2 \text{ mA}$

$$V_L = 2 \times 1 = 2 \text{ Volt}$$

$$R_s = \frac{3}{3 \text{ mA}} = 750 \Omega$$

12. Two wires (A & B) of same area are subjected to equal tensile forces gets elongated by same amount. The ratio of young's modulus of two material is $\frac{Y_A}{Y_B} = \frac{20}{11}$.

Find the ratio of lengths of the wire $\frac{l_A}{l_B}$?

(1) $\frac{10}{11}$ (2) $\frac{20}{11}$

(3) $\frac{11}{10}$ (4) $\frac{11}{20}$

Answer (2)

Sol. $\frac{Fl}{A\Delta l} = Y$

$$\Rightarrow l = \frac{AY\Delta l}{F}$$

So, $\frac{l_A}{l_B} = \left(\frac{Y_A}{Y_B} \right) \cdot \left(\frac{\Delta l_A}{\Delta l_B} \right)$

$$\Rightarrow \frac{l_A}{l_B} = \frac{20}{11}$$

Our Problem Solvers shine bright in **JEE 2025**

JEE (Advanced)

ADVAY
MAYANK
AIR 36



RUJUL
GARG
AIR 41



ARUSH
ANAND
AIR 64



JEE (MAIN)

SHREYAS
LOHIYA
AIR 6
Uttar Pradesh Topper
100



KUSHAGRA
BAINGAHA
AIR 7
Uttar Pradesh Topper
100



HARSSH
A GUPTA
AIR 15
Telangana Topper
100



13. In YDSE, path difference for two points P and Q are $\frac{\lambda}{3}$ and $\frac{\lambda}{6}$ respectively. Ratio of intensities at P and Q is

- (1) $\frac{1}{4}$ (2) $\frac{1}{3}$
(3) 4 (4) 2

Answer (2)

Sol. $\Delta\theta_1 = \frac{2\pi\lambda}{\lambda \cdot 3} = 120^\circ$,

$\Delta\theta_2 = \frac{2\pi}{\lambda} \times \frac{\lambda}{6} = 60$

Ratio = $\frac{\cos^2 60}{\cos^2 30} = \frac{1}{3}$

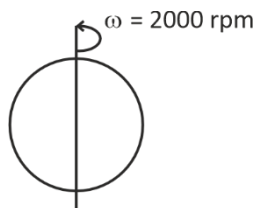
14. A one mole sample of gas undergoes an isothermal process in which volume changes from 3 litre to 1 litre. Find work done on the gas if initial pressure was 3×10^7 Pa.

- (1) $270 \ln 3$ (2) $900 \ln 3$
(3) $3000 \ln 3$ (4) $9000 \ln 3$

Answer (4)

Sol. $w = nRT \ln 3$
 $= 3 \times 10^7 \times 3 \times 10^{-3} \ln 3$
 $= 9 \times 10^4 \ln 3$

15. A solid uniform sphere of mass m and radius R initially rotating with angular speed of $\omega = 2000$ rpm. If it stops in 10 sec when subjected to some constant retarding torque, then find number of revolutions and magnitude of torque.



- (1) $200; \frac{8\pi}{3} mR^2$ (2) $500; \frac{10\pi}{3} mR^2$
(3) $\frac{500}{3}; \frac{8\pi}{3} mR^2$ (4) $400; \frac{10\pi}{3} mR^2$

Answer (3)

Sol. $\omega_i = 2000 \text{ rpm} = 2000 \times \frac{2\pi}{60} \text{ rad/sec}$

$= \frac{200}{3} \pi \text{ rad/sec}$

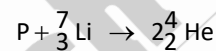
$\alpha = \frac{\Delta\omega}{\Delta t} = \frac{200\pi}{3 \times 10} = \frac{20\pi}{3} \text{ rad/sec}$

So, $|\tau| = I\alpha = \frac{2}{5} mR^2 \times \frac{20}{3} \pi = \frac{8}{3} \pi mR^2$

Number of revolution = $\frac{1}{2} \alpha \frac{t^2}{2\pi}$

$\Rightarrow N = \frac{1}{2} \times \frac{20\pi}{3} \times \frac{10 \times 10}{2\pi} = \frac{500}{3}$

16. Consider nuclear reaction,



Energy absorbed in the process is

$(m_p = 1.0080u, m_{L_1} = 7.0173u$

$m_{He} = 4.0201u)$

- (1) 14 MeV (2) 24 MeV
(3) 18 MeV (4) 11 MeV

Answer (1)

Sol. $\Delta E = C^2 \Delta m = 0.01486 \times 931.5$

17. Shortest wavelength of Lyman series is λ_0 longest wavelength of Balmer series is λ . Find value of $\frac{\lambda}{\lambda_0}$.

- (1) $\frac{36}{5}$ (2) $\frac{18}{5}$
(3) $\frac{4}{9}$ (4) $\frac{3}{7}$

Answer (1)

Our Problem *Solvers* shine bright in **JEE 2025**

JEE (Advanced)

ADVAY
MAYANK
AIR 36



RUJUL
GARG
AIR 41



ARUSH
ANAND
AIR 64



SHREYAS
LOHIYA
AIR 6
Uttar Pradesh Topper
100



KUSHAGRA
BAINGAHA
AIR 7
Uttar Pradesh Topper
100



HARSSH
A GUPTA
AIR 15
Telangana Topper
100



Sol. $\lambda_0 = \frac{hc}{E_0}$ $\lambda = \frac{36hc}{5E_0}$

$E = E_0 \left(\frac{1}{4} - \frac{1}{9} \right)$ $\frac{5\lambda}{\lambda_0} = 36$

$E = \frac{5}{36} E_0$

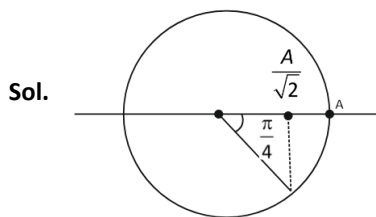
18.
19.
20.

SECTION - B

Numerical Value Type Questions: This section contains 5 Numerical based questions. The answer to each question should be rounded-off to the nearest integer.

21. Time period of SHM of a particle is 16 sec. Find minimum time to move from $x = A$ to $x = \frac{A}{\sqrt{2}}$.

Answer (2)



$T = \frac{\pi}{\frac{4}{2\pi}} = \frac{T}{8}$

$T = 2 \text{ sec}$

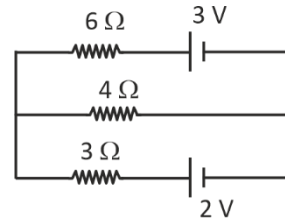
22. Mass and radius of a solid sphere is measured with uncertainty of 1% and 2% respectively uncertainty (in percent) in calculation of density is

Answer (7)

Sol. $\rho = \frac{m}{\frac{4}{3}\pi r^3}$

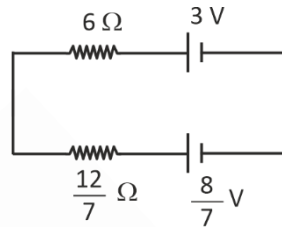
$\frac{\Delta\rho}{\rho} = \frac{\Delta m}{m} + \frac{3\Delta r}{r} = 1 + 6 = 7$

23. Heat dissipation in 6Ω resistance in 54 sec is $\frac{\alpha}{9}$ J then α is



Answer (169)

Sol.



$i = \frac{3 - \frac{8}{7}}{6 + \frac{12}{7}} = \frac{13}{54}$

$H = Pt = \frac{13}{54} \times \frac{13}{54} \times 6 \times 54 = \frac{169}{9}$

24. A mass of $m = 1$ kg starts falling with zero initial speed. By the time it falls a height of $h = 10$ m its speed becomes $v = 10$ m/s. Find the magnitude of work done (in Joule) by resistive force.

Answer (50)

Sol. $\Delta KE = \Delta W_{gr} + \Delta W_R$

$\frac{1}{2}(1) \times 100 = (1 \times 10 \times 10) + \Delta W_R$

$\Rightarrow \Delta W_R = -50 \text{ Joule}$

$|\Delta W_R| = 50 \text{ Joule}$

- 25.

Our Problem Solvers shine bright in **JEE 2025**

JEE (Advanced)

ADVAY
MAYANK
AIR 36



RUJUL
GARG
AIR 41



ARUSH
ANAND
AIR 64



SHREYAS
LOHIYA
AIR 6
Uttar Pradesh Topper
100



KUSHAGRA
BAINGAHA
AIR 7
Uttar Pradesh Topper
100



HARSSH
A GUPTA
AIR 15
Telangana Topper
100



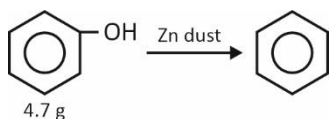
CHEMISTRY

SECTION - A

Multiple Choice Questions: This section contains 20 multiple choice questions. Each question has 4 choices (1), (2), (3) and (4), out of which **ONLY ONE** is correct.

Choose the correct answer :

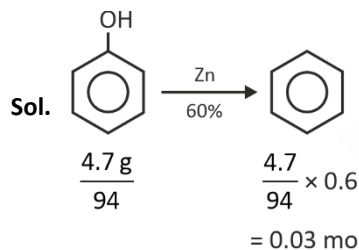
1. Consider the reaction :



Find the number of moles of 'P' formed (if yield of reaction is 60 percent).

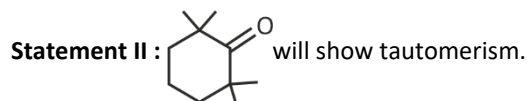
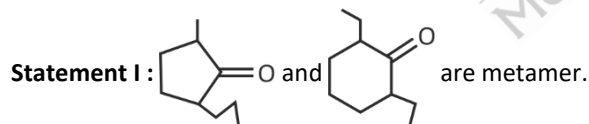
- (1) 0.05
- (2) 0.06
- (3) 0.03
- (4) 0.04

Answer (3)



MW of phenol = 77 + 16 + 1 = 94

2. Given below are two statements.



In light of above statements, choose correct option.

- (1) Both Statement I and Statement II are correct
- (2) Statement I is incorrect, Statement II is correct
- (3) Statement I is correct, Statement II is incorrect
- (4) Both Statement I and Statement II are incorrect

Answer (4)

Sol. Statement I is incorrect because molecular formula is not same.

Statement II is incorrect because α -H is essential to show tautomerism.

3. Match list-I contain *d*-electronic configuration of tetrahedral complex with their CFSE value in list-II

	List-I		List-II
(A)	d^2	(i)	$-0.6 \Delta_t$
(B)	d^4	(ii)	$-0.4 \Delta_t$
(C)	d^6	(iii)	$-1.2 \Delta_t$
(D)	d^5	(iv)	0

- (1) (A)-(iii), (B)-(ii), (C)-(i), (D)-(iv)
- (2) (A)-(ii), (B)-(iii), (C)-(i), (D)-(iv)
- (3) (A)-(i), (B)-(ii), (C)-(iii), (D)-(iv)
- (4) (A)-(ii), (B)-(iii), (C)-(iv), (D)-(i)

Answer (1)

Sol. $d^4 = e^2 t_2^2 = -0.4 \Delta_t$

$d^2 = e^2 \Rightarrow -1.2 \Delta_t$

$d^6 = e^3 t_2^3 \Rightarrow -0.6 \Delta_t$

$d^5 = e^2 t_2^3 = 0$

Our Problem *Solvers* shine bright in **JEE 2025**

JEE (Advanced)

ADVAY
MAYANK
AIR 36



RUJUL
GARG
AIR 41



ARUSH
ANAND
AIR 64



SHREYAS
LOHIYA
AIR 6
Uttar Pradesh Topper
100 Overall



KUSHAGRA
BAINGAHA
AIR 7
Uttar Pradesh Topper
100 Overall



HARSSH
A GUPTA
AIR 15
Telangana Topper
100 Overall



4. Match the following.

List-I		List-II	
P.	Vitamin – A	I.	Scurvy
Q.	Vitamin – C	II.	Convulsion
R.	Vitamin – B ₆	III.	Pernicious anaemia
S.	Vitamin – B ₁₂	IV.	Xerophthalmia

- (1) P – I, Q – III, R – II, S – IV
 (2) P – II, Q – III, R – I, S – IV
 (3) P – IV, Q – I, R – II, S – III
 (4) P – IV, Q – I, R – III, S – II

Answer (3)

Sol. P – IV, Q – I, R – II, S – III

5. What will be the empirical formula of compound, if compound has 69.9% Fe and rest is oxygen?

- (1) Fe₃O₄ (2) Fe₂O₃
 (3) FeO (4) FeO₂

Answer (2)

Sol. Fe = 69.9%

O = 30.1%

Let mass of compound = 100 g

Fe = 69.9 g

O = 30.1 g

$$\text{Mol of Fe} = \frac{69.9}{56} = 1.25$$

$$\text{Mol of O} = \frac{30.1}{16} = 1.88$$

$$\text{Molar ratio of Fe} = \frac{1.25}{1.25} = 1$$

$$\text{Molar ratio of O} = \frac{1.88}{1.25} = 1.5$$

EF = Fe₂O₃

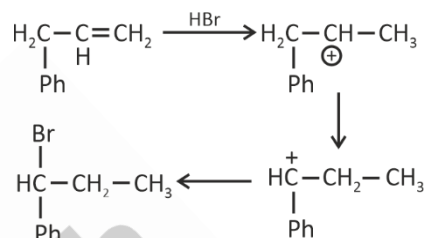
6. **Statement I** : 3-phenyl prop-1-ene will react with HBr and give an alkyl halide major product having 1 chiral C-atom.

Statement II : Aryl chloride and aryl cyanide both can be formed by Gattermann and Sandmeyer reaction.

- (1) Statement I is correct, Statement II is incorrect
 (2) Statement I is incorrect, Statement II is correct
 (3) Both Statement I and Statement II are correct
 (4) Both Statement I and Statement II are incorrect

Answer (3)

Sol.



7. If the wavelength of first line of Lyman Series for H-atom is $x \text{ \AA}$. Then the longest wavelength in Balmer series of He⁺ ion will be

- (1) $\frac{5x}{9}$ (2) $\frac{27x}{20}$
 (3) $\frac{x}{27}$ (4) $\frac{5x}{27}$

Answer (2)

Sol.

$$\frac{1}{x} = R(1)^2 \left(\frac{1}{1^2} - \frac{1}{2^2} \right) \Rightarrow \frac{1}{x} = \frac{3}{4}$$

$$\frac{1}{\lambda} = R(2)^2 \left(\frac{1}{2^2} - \frac{1}{3^2} \right) \Rightarrow \frac{1}{\lambda} = \frac{5 \times 4}{36}$$

$$\frac{\lambda}{x} = \frac{9 \times 3}{4 \times 5}$$

$$\lambda = \frac{27x}{20}$$

Our Problem *Solvers* shine bright in **JEE 2025**

JEE (Advanced)

ADVAY
MAYANK
AIR 36



RUJUL
GARG
AIR 41



ARUSH
ANAND
AIR 64



JEE (MAIN)

SHREYAS
LOHIYA
AIR 6
Uttar Pradesh Topper
100 Overall



KUSHAGRA
BAINGAHA
AIR 7
Uttar Pradesh Topper
100 Overall

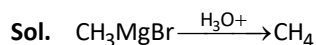


HARSSH
A GUPTA
AIR 15
Telangana Topper
100 Overall



8. Which of the following can be used to form CH₄ gas?
- (1) Kolbe's electrolysis
 - (2) From CH₃MgBr
 - (3) By Wurtz reaction
 - (4) By reduction of CH₃CH₂Cl

Answer (2)



9. Match List-I with List-II and choose the correct option.

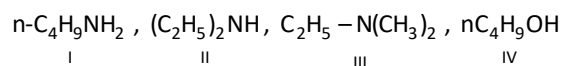
	List-I		List-II
A.	2s	(i)	One radial node + zero angular node
B.	3s	(ii)	Two radial node + zero angular node
C.	3p	(iii)	One radial node + 1 angular node
D.	3d	(iv)	Zero radial node + 2 angular node

- (1) A(i), B(ii), C(iii), D(iv)
- (2) A(ii), b(iv), C(iii), D(i)
- (3) A(ii), B(i), C(iii), D(iv)
- (4) A(iv), B(iii), C(ii), D(i)

Answer (1)


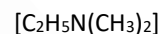
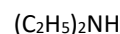
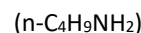
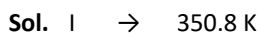
Sol.	Radial node (n - l - 1)	Angular node (l)
2s	1	0
3s	2	0
3p	1	1
3d	0	2

10. Arrange the given compounds in increasing order of boiling point.



- (1) II < III < I < IV
- (2) I < II < IV < III
- (3) III < II < I < IV
- (4) III < I < II < IV

Answer (3)



11. 0.25 moles of a non-volatile and non-ionisable compound is mixed with 1 mole of solvent. Find the percentage relative lowering in vapour pressure.

- (1) 20%
- (2) 40%
- (3) 60%
- (4) 35%

Answer (1)

Sol. $\frac{p^0 - p_s}{p^0} = \frac{n}{n+N} = \frac{0.25}{0.25+1} = \frac{0.25}{1.25} = \frac{1}{5}$

Percentage relative lowering in vapour pressure

$= \frac{1}{5} \times 100$

$= 20\%$

Our Problem *Solvers* shine bright in **JEE 2025**

JEE (Advanced)

ADVAY
MAYANK
AIR 36



RUJUL
GARG
AIR 41



ARUSH
ANAND
AIR 64



SHREYAS
LOHIYA
AIR 6
Uttar Pradesh Topper
100 Overall



KUSHAGRA
BAINGAHA
AIR 7
Uttar Pradesh Topper
100 Overall



HARSSH
A GUPTA
AIR 15
Telangana Topper
100 Overall



12. Consider the Lewis dot structure in following pair.

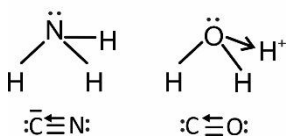
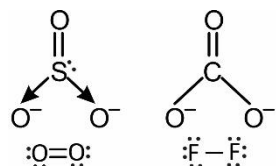
- (A) SO_3^{2-} and CO_3^{2-} (B) O_2 and F_2
 (C) NH_3 and H_3O^+ (D) CN^- and CO

Choose pair which have same structure

- (1) A and C only (2) A, C, D only
 (3) B, C & D only (4) C & D only

Answer (4)

Sol.



13. Find the limiting molar conductivity of BaSO_4 .

[Given : $\Lambda_m^\circ(\text{HCl}) = x_1$

$\Lambda_m^\circ(\text{H}_2\text{SO}_4) = x_2$

$\Lambda_m^\circ(\text{BaCl}_2) = x_3$]

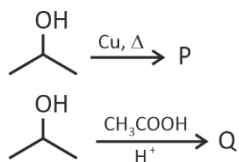
- (1) $x_2 + x_3 - 2x_1$ (2) $2x_2 + x_3 - 2x_1$
 (3) $x_2 + x_3 - x_1$ (4) $x_2 + x_3 + 2x_1$

Answer (1)

Sol. $\Lambda_m^\circ \text{H}_2\text{SO}_4 + \Lambda_m^\circ \text{BaSO}_4 - 2(\Lambda_m^\circ \text{HCl}) = \Lambda_m^\circ \text{BaSO}_4$

So, $\Lambda_m^\circ \text{BaSO}_4 = x_2 + x_3 - 2x_1$

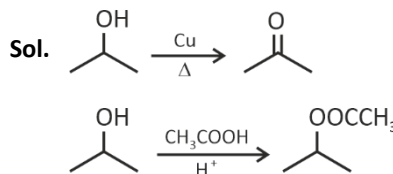
14. Consider the following reaction



Compound P and Q are respectively.

- (1) $\text{CH}_3\text{COCH}_3, (\text{CH}_3)_2\text{CHCOOCH}_3$
 (2) $\text{CH}_3\text{COOCH}_2\text{CH}_2\text{CH}_3, \text{CH}_3 - \text{CH} = \text{CH}_2$
 (3) $\text{C}_2\text{H}_5\text{CHO}, \text{CH}_3\text{COOC}_2\text{H}_5$
 (4) $\text{CH}_3\text{CH}_2\text{CH}_3, \text{CH}_3\text{COOC}_3\text{H}_7$

Answer (1)



15. Consider the following statements :

Statement I : Al is more reducing in nature than Tl.

Statement II : First three ionisation enthalpy of B are high, so it forms covalent compound

- (1) Statement I and statement II both correct
 (2) Statement I and statement II both incorrect
 (3) Statement I correct and statement II incorrect
 (4) Statement I incorrect and Statement II correct

Answer (1)

Sol. $E_{\text{Al}^{3+}/\text{Al}}^\circ = -1.66 \text{ V}$

$E_{\text{Tl}^{3+}/\text{Tl}}^\circ = +0.72 \text{ V}$ $E_{\text{Tl}^{3+}/\text{Tl}^+}^\circ = 1.26 \text{ V}$

Statement I correct

Due to small size of boron it has extremely high value of $(\text{IE}_1 + \text{IE}_2 + \text{IE}_3)$

Al due to larger size it has lower ionisation energy $(\text{IE}_1 + \text{IE}_2 + \text{IE}_3)$

Our Problem Solvers shine bright in **JEE 2025**

JEE (Advanced)

ADVAY
MAYANK
AIR 36



RUJUL
GARG
AIR 41



ARUSH
ANAND
AIR 64



JEE (MAIN)

SHREYAS
LOHIYA
AIR 6
Uttar Pradesh Topper
100 Overall



KUSHAGRA
BAINGAHA
AIR 7
Uttar Pradesh Topper
100 Overall



HARSSH
A GUPTA
AIR 15
Telangana Topper
100 Overall

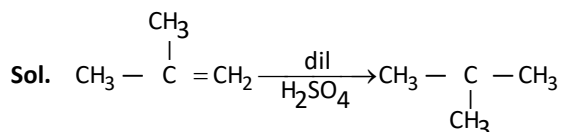


16. 2-Methyl propene is added into a solvent (mixture of ethyl acetate and ether) and the R_f value is found to be 0.42.

If the same 2-methyl propene is reacted with dilute H_2SO_4 the major product obtained is x. Find the value of x.

- (1) 0.12
- (2) 0.42
- (3) 0.65
- (4) 0.84

Answer (1)



2-Methylpropene is a non-polar hydrocarbon when reacted with dilute H_2SO_4 polar alcohol due to presence of the $-OH$ group, which allows for H-bonding with solvent.

So, a polar alcohol will have a lower R_f value than a non-polar alkene.

For 2-methylpropan-2-ol. R_f value showed be less than 0.42.

17. The correct order of magnitude of work done in the following cases for some volume change and pressure change as mentioned.

Case I : (a) Expansion in single step ($P_1 \rightarrow P_2$)

Case II : (b) Expansion in multistep ($P_1 \rightarrow P_2$)

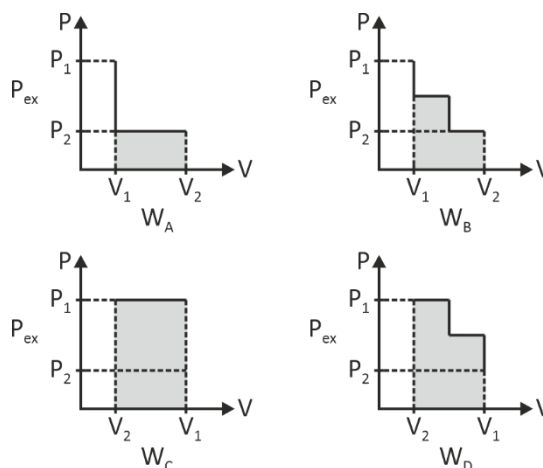
Case III : (c) Compression in single step ($P_2 \rightarrow P_1$)

Case IV : (d) Compression in multistep ($P_2 \rightarrow P_1$)

- (1) $W_C > W_D > W_B > W_A$
- (2) $W_D > W_C > W_B > W_A$
- (3) $W_A > W_B > W_D > W_C$
- (4) $W_A > W_B > W_C > W_D$

Answer (1)

Sol.



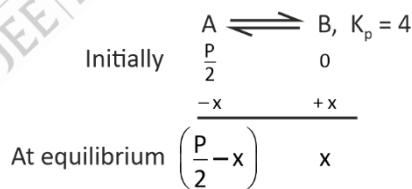
18. He is mixed with a gas A in equimolar ratio at pressure P, total volume is 10 L at 300 K. $\left\{ A \rightleftharpoons B, K_p = 4 \right\}$

The partial pressure of He, A and B at equilibrium is respectively.

- (1) 0.5 P, 0.1 P and 0.4 P
- (2) 0.2 P, 0.3 P and 0.5 P
- (3) 0.5 P, 0.4 P and 0.1 P
- (4) 0.5 P, 0.2 P and 0.3 P

Answer (1)

Sol. Initially $p_{He} = p_A$, and $P = p_{He} + p_A$, so $p_{He} = p_A = \frac{P}{2}$



$$4 = \frac{x}{\left(\frac{P}{2} - x\right)}, \text{ on solving } x = 0.4 P$$

$$\text{So, at equilibrium } p_A = \left(\frac{P}{2}\right) - 0.4 P = 0.1 P$$

$$p_B = 0.4 P$$

$$p_{He} = 0.5 P$$

Our Problem Solvers shine bright in **JEE 2025**

JEE (Advanced)

ADVAY
MAYANK
AIR 36



RUJUL
GARG
AIR 41



ARUSH
ANAND
AIR 64



JEE (MAIN)

SHREYAS
LOHIYA
AIR 6
Uttar Pradesh Topper
100 Overall



KUSHAGRA
BAINGAHA
AIR 7
Uttar Pradesh Topper
100 Overall



HARSSH
A GUPTA
AIR 15
Telangana Topper
100 Overall



19. Match compounds in column I with column II

	Column-I		Column-II
(a)	Lysine	(i)	Hinsberg Test
(b)	Glutamine	(ii)	Hoffmann Bromamide (starting material)
(c)	Serine	(iii)	Ceric ammonium nitrate
(d)	Tyrosine	(iv)	Neutral FeCl ₃ test

(1) (a)-(i), (b)-(ii), (c)-(iii), (d)-(iv)

(2) (a)-(ii), (b)-(i), (c)-(iii), (d)-(iv)

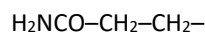
(3) (a)-(i), (b)-(ii), (c)-(iv), (d)-(iii)

(4) (a)-(ii), (b)-(i), (c)-(iv), (d)-(iii)

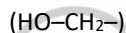
Answer (1)

Sol. Lysine → Hinsberg test $\text{H}_2\text{N}-(\text{CH}_2)_4-$

Glutamine → Starting Hoffmann Bromamide



Serine → Ceric ammonium nitrate test



Tyrosine – Neutral FeCl₃ test $(p)\text{HO}-\text{C}_6\text{H}_4-\text{CH}_2-$

20. Choose the correct option of order of energy for square planar complex

(1) $dxz = dyz < dx^2 - y^2$

(2) $dxy = dxz > dz^2$

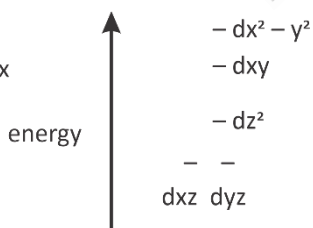
(3) $dxy = dyz = dxz$

(4) $dxy < dz^2 < dx^2 - y^2$

Answer (1)

Sol.

splitting pattern of square planar complex



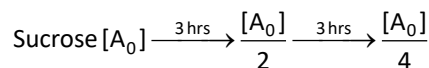
SECTION - B

Numerical Value Type Questions: This section contains 5 Numerical based questions. The answer to each question should be rounded-off to the nearest integer.

21. Sucrose hydrolyses in acidic medium to form glucose and fructose which follows first order kinetics. If the half life of sucrose is 3 hrs. The % of sucrose left after 6 hrs.

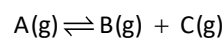
Answer (25)

Sol. $t_{1/2} = 3$ hrs



% of sucrose left is 25.

22. For the reaction,



Consider the data

log K _p	3.5	2.5
$\frac{1}{T}$ (K ⁻¹)	0.04	0.05

Calculate the value of $\frac{\Delta H}{2.303R}$ (in K) based on above data.

Answer (100)

$$\text{Sol. } \log \frac{K_{p_2}}{K_{p_1}} = \frac{\Delta H}{2.303R} \left[\frac{1}{T_1} - \frac{1}{T_2} \right]$$

$$\log K_{p_2} - \log K_{p_1} = \frac{\Delta H}{2.303R} [0.05 - 0.04]$$

$$1 = \frac{\Delta H}{2.303R} \times 0.01$$

$$100 = \frac{\Delta H}{2.303R}$$

23.

24.

25.

Our Problem *Solvers* shine bright in **JEE 2025**

JEE (Advanced)

ADVAY
MAYANK
AIR 36



RUJUL
GARG
AIR 41



ARUSH
ANAND
AIR 64



JEE (MAIN)

SHREYAS
LOHIYA
AIR 6
Uttar Pradesh Topper
100 Overall



KUSHAGRA
BAINGAHA
AIR 7
Uttar Pradesh Topper
100 Overall



HARSSH
A GUPTA
AIR 15
Telangana Topper
100 Overall



$$\sum_{i=1}^{25} (x_i - 5)^2 = 1000$$

$$\sum_{i=1}^{25} x_i^2 - 10 \sum_{i=1}^{25} x_i = 375 \quad \dots(2)$$

$$2 \sum_{i=1}^{25} x_i^2 = 2250$$

$$\sum_{i=1}^{25} x_i^2 = 1125$$

$$\text{and } \sum_{i=1}^{25} x_i = 75$$

$$\text{Mean} = \frac{\sum_{i=1}^{25} x_i}{25} = \frac{75}{25} = 3$$

$$\text{S.D} = \sqrt{\frac{\sum_{i=1}^{25} x_i^2}{25} - (\text{Mean})^2}$$

$$= \sqrt{36} = 6$$

$$\frac{\text{Mean}}{\text{S.D}} = \frac{3}{6} = \frac{1}{2}$$

4. In the expansion of $(1 + \alpha x)^{26}$ and $(1 - \alpha x)^{28}$, the coefficient of middle term is same, then the value of α is

(1) $\frac{7}{22}$

(2) $\frac{7}{27}$

(3) $\frac{5}{27}$

(4) $\frac{5}{22}$

Answer (2)

Sol. $(1 + \alpha x)^{26}$

Middle term position = $\frac{26}{2} + 1 = 14^{\text{th}}$ term.

$$T_{14} = {}^{26}C_{13} (\alpha x)^{13} = {}^{26}C_{13} \alpha^{13} x^{13}$$

$$(1 - \alpha x)^{28}$$

Middle term : $\frac{28}{2} + 1 = 15^{\text{th}}$ term

$$T_{15} = {}^{28}C_{14} (-\alpha x)^{14} = {}^{28}C_{14} \alpha^{14} x^{14}$$

Now,

$${}^{26}C_{13} \alpha^{13} = {}^{28}C_{14} \alpha^{14}$$

$$\therefore \alpha = \frac{{}^{26}C_{13}}{{}^{28}C_{14}} = \frac{7}{27}$$

5. $a_1, a_2, a_3, \dots, a_n$ are in A.P. and sum of first 10 terms is 160. $g_1, g_2, g_3, \dots, g_n$ are in G.P., where $g_1 + g_2 = 8$. If the first term of A.P. is equal to common ratio of G.P. and first term of G.P. is equal to common difference of A.P., then sum of all possible values of g_1 is equal to

(1) $\frac{34}{9}$

(2) $\frac{28}{9}$

(3) $\frac{23}{3}$

(4) $\frac{28}{5}$

Answer (1)

Sol. $g_1 = d$ and $a_1 = r \dots$ (given)

$$160 = \frac{10}{2} (2a_1 + 9d) \dots \text{(given)}$$

$$\Rightarrow 160 = 5(2r + 9d)$$

$$\Rightarrow 2r + 9d = 32$$

$$g_2 = g_1 \times r \Rightarrow g_2 = dr \quad (g_1 = d)$$

$$g_1 + g_2 = 8 \dots \text{(given)}$$

$$\Rightarrow d(1 + r) = 8$$

$$\Rightarrow d \left(1 + \frac{32 - 9d}{2} \right) = 8$$

$$\Rightarrow 9d^2 - 34d + 16 = 0$$

sum of all possible value of g_1

= sum of all possible value of d

$$= \frac{34}{9}$$

Our Problem *Solvers* shine bright in **JEE 2025**

JEE (Advanced)

ADVAY
MAYANK
AIR 36



RUJUL
GARG
AIR 41



ARUSH
ANAND
AIR 64



SHREYAS
LOHIYA
AIR 6
Uttar Pradesh Topper
100 Overall



KUSHAGRA
BAINGAHA
AIR 7
Uttar Pradesh Topper
100 Overall



HARSSH
A GUPTA
AIR 15
Telangana Topper
100 Overall

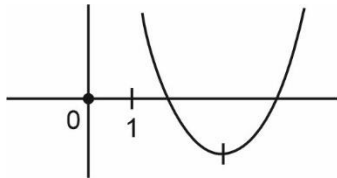


6. Consider e_1 and e_2 be roots of the equation $x^2 - ax + 2 = 0$. Set of values of a for which e_1 and e_2 are eccentricities of hyperbolas then $a \in [\alpha, \beta)$ and set of values of a for which e_1 and e_2 are eccentricity of a hyperbola and an ellipse is (γ, ∞) then $\alpha^2 + \beta^2 + \gamma^2$ is equal to
- (1) 26 (2) 24
(3) 18 (4) 32

Answer (1)

Sol. $x^2 - ax + 2 = 0$

S. 1 $\Rightarrow e_1$ and e_2 are eccentricity of hyperbola
 $\Rightarrow e_1, e_2 > 1$



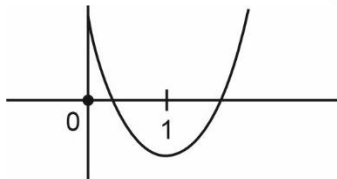
$\Rightarrow f(1) > 0, -\frac{b}{2a} > 1, D \geq 0 \Rightarrow a^2 - 8 \geq 0 \Rightarrow |a| \geq 2\sqrt{2}$

$\Rightarrow \frac{a}{2} > 1 \Rightarrow a > 2$

$1 - a + 2 > 0 \Rightarrow a < 3$

$\Rightarrow a \in [2\sqrt{2}, 3)$

S. 2 $\Rightarrow e_1$ and e_2 be eccentricity of hyperbola & Ellipse respectively



$\Rightarrow f(1) < 0$ and $D > 0$

$\Rightarrow 1 - a + 2 < 0 \Rightarrow a > 3$

$a^2 - 8 > 0 \Rightarrow |a| \geq 2\sqrt{2}$

$\Rightarrow a \in (3, \infty)$

$\Rightarrow \alpha^2 + \beta^2 + \gamma^2 = 8 + 9 + 9 = 26$

7. There are $(n + 1)$ coins. ' n ' coins are unbiased coins and one coin has two heads. A coin is randomly chosen and tossed once. If the probability of getting head is $\frac{9}{16}$, then the value of n is
- (1) 5 (2) 6
(3) 7 (4) 8

Answer (3)

Sol. There are n unbiased coin, 1 biased coin

E_1 : Biased coin is picked

E_2 : Unbiased coin is picked

H : Output is Head

$$P(H) = P(E_1) \cdot P\left(\frac{H}{E_1}\right) + P(E_2) \cdot P\left(\frac{H}{E_2}\right)$$

$$\frac{9}{16} = \frac{1}{n+1} \times 1 + \frac{n}{n+1} \times \frac{1}{2}$$

$$\Rightarrow \frac{9}{16} = \frac{2+n}{2(n+1)}$$

$$\Rightarrow 9n + 9 = 16 + 8n$$

$$\Rightarrow n = 7$$

8. The number of 4 letter words which can be made using the letters of the word INCONSEQUENTIAL without repetition using 2 vowels and 2 consonants is equal to

- (1) 3460 (2) 3600
(3) 4200 (4) 2400

Answer (2)

Sol. Vowels : {A, E, I, O, U}

Consants : {N, C, S, Q, T, L}

Two vowels and two consonants :

$${}^5C_2 \times {}^6C_2 \times 4!$$

$$= 10 \times 15 \times 24 = 3600$$

Our Problem Solvers shine bright in **JEE 2025**

JEE (Advanced)

ADVAY
MAYANK
AIR 36



RUJUL
GARG
AIR 41



ARUSH
ANAND
AIR 64



JEE (MAIN)

SHREYAS
LOHIYA
AIR 6
Uttar Pradesh Topper
100 Overall



KUSHAGRA
BAINGAHA
AIR 7
Uttar Pradesh Topper
100 Overall



HARSSH
A GUPTA
AIR 15
Telangana Topper
100 Overall



9. If $\tan^{-1}(1-\alpha) + \tan^{-1}(1-\beta) = \frac{\pi}{4}$ & $\beta = \frac{1}{3\alpha}$ then the value of $6(\alpha + \beta)$ is equal to
- (1) 7 (2) 9
(3) 8 (4) 6

Answer (1)

Sol. $\tan^{-1}(1-\alpha) + \tan^{-1}(1-\beta) = \frac{\pi}{4}$

$$\tan^{-1}\left(\frac{1-\alpha+1-\beta}{1-(1-\alpha)(1-\beta)}\right) = \frac{\pi}{4}$$

$$\frac{2-\alpha-\beta}{1-(1-\alpha-\beta+\alpha\beta)} = 1$$

$$\frac{2-(\alpha+\beta)}{\alpha+\beta-\frac{1}{3}} = 1$$

$$2-(\alpha+\beta) = \alpha+\beta-\frac{1}{3}$$

$$2(\alpha+\beta) = 2 + \frac{1}{3} = \frac{7}{3}$$

$$\alpha+\beta = \frac{7}{6}$$

$$\therefore 6(\alpha+\beta) = 7$$

10. If $1 + \cos x = \sqrt{3} \sin x$ where $x \in (-2\pi, 2\pi)$. Then, the sum of all the values of x satisfy the given equation is

- (1) 5π (2) $\frac{4\pi}{3}$
(3) 4π (4) $\frac{-4\pi}{3}$

Answer (4)

Sol. $1 + \cos x = \sqrt{3} \sin x$

$$\sqrt{3} \sin x - \cos x = 1$$

$$\frac{\sqrt{3}}{2} \sin x - \frac{1}{2} \cos x = \frac{1}{2}$$

$$\left(\cos \frac{\pi}{6}\right) \sin x - \left(\sin \frac{\pi}{6}\right) \cos x = \frac{1}{2}$$

$$\sin\left(x - \frac{\pi}{6}\right) = \frac{1}{2}$$

$$x - \frac{\pi}{6} = \frac{\pi}{6} + 2n\pi$$

$$\text{Or } x = \frac{\pi}{6} = \frac{5\pi}{6} + 2n\pi$$

$$x = \pi, -\pi, \frac{-5\pi}{3}, \frac{\pi}{3}$$

$$\sum x = \frac{\pi}{3} + \pi - \pi - \frac{5\pi}{3} = \frac{-4\pi}{3}$$

11. Points P and Q lie on the parabola $y^2 = 12x$. The ratio of their y -coordinates is $1 : 2$ and the length of line segment PQ is $3\sqrt{13}$. If line PQ makes an angle θ with positive x -axis in anticlockwise direction, $\theta \in (0, \pi)$, then $\sin \theta$ is equal to

- (1) $\frac{1}{\sqrt{13}}$ (2) $\frac{3}{\sqrt{13}}$
(3) $\frac{2}{\sqrt{13}}$ (4) $\frac{1}{\sqrt{12}}$

Answer (3)

Sol. $y^2 = 12x$

Let $P(3t_1^2, 6t_1)$, $Q(3t_2^2, 6t_2)$

$$\frac{6t_1}{6t_2} = \frac{1}{2}$$

$$\Rightarrow t_2 = 2t_1$$

$$PQ^2 = (3t_2^2 - 3t_1^2)^2 + (6t_2 - 6t_1)^2$$

$$\Rightarrow (3\sqrt{13})^2 = 9(3t_1^2)^2 + 36t_1^2$$

$$\Rightarrow 117 = 81t_1^4 + 36t_1^2$$

$$\Rightarrow 9t_1^4 + 4t_1^2 - 13 = 0$$

Our Problem *Solvers* shine bright in **JEE 2025**

JEE (Advanced)

ADVAY
MAYANK
AIR 36



RUJUL
GARG
AIR 41



ARUSH
ANAND
AIR 64



SHREYAS
LOHIYA
AIR 6
Uttar Pradesh Topper
100 Overall



KUSHAGRA
BAINGAHA
AIR 7
Uttar Pradesh Topper
100 Overall



HARSSH
A GUPTA
AIR 15
Telangana Topper
100 Overall



14. If the hyperbola $\frac{x^2}{a^2} - \frac{y^2}{b^2} = 1$, $a, b > 0$ with eccentricity e passes through point $P(6, 4\sqrt{3})$ and $15(e^2 + 1) = (34)e$ then length of latus rectum of hyperbola $\frac{x^2}{b^2} - \frac{y^2}{2(a^2 + 1)} = 1$ is

- (1) 10 (2) 12
(3) 14 (4) 8

Answer (1)

Sol. $(6, \sqrt{48})$ lie on hyperbola,

$$\Rightarrow \frac{36}{a^2} - \frac{48}{b^2} = 1 \quad \dots(1)$$

and $15(e^2 + 1) = 34e$

$$\Rightarrow 15e^2 - 34e + 15 = 0$$

$$e = \frac{34 \pm \sqrt{34^2 - 4 \cdot 15^2}}{30}$$

$$= \frac{34 \pm \sqrt{34^2 - 30^2}}{30} = \frac{34 \pm \sqrt{64 \times 4}}{30} = \frac{34 \pm 16}{30}$$

Since $e > 1 \Rightarrow e = \frac{50}{30} = \frac{5}{3}$

$$\Rightarrow e^2 = \frac{b^2}{a^2} + 1 = \frac{25}{9} \Rightarrow \frac{b}{a} = \frac{16}{9} \quad \dots(2)$$

\Rightarrow solving (1) & (2)

$$a^2 = 9, \quad b^2 = 16$$

$$\text{Latus rectum} = 2 \left(\frac{2(a^2 + 1)}{b} \right) = \frac{4(10)}{4} = 10$$

15. Consider the circle $x^2 + y^2 + 2gx + 2fy + 25 = 0$, where $g, f \in \mathbb{Z}$. Centre lies on $2x - y = 4$ and the area equilateral triangle inscribed within this circle is $27\sqrt{3}$ sq. units. The square of the length of chord whose equation is $x = 1$ is equal to

- (1) 45 (2) 40
(3) 80 (4) 90

Answer (3)

Sol. $x^2 + y^2 + 2gx + 2fy + 25 = 0$

centre: $(-g, -f)$ lies on $2x - y = 4$

$$-2g + f = 4 \Rightarrow f = 2g + 4$$

$$\text{area} = \frac{3\sqrt{3}}{4} R^2 = 27\sqrt{3}$$

$$\Rightarrow R = 6$$

$$36 = g^2 + f^2 - 25$$

$$\Rightarrow g^2 + f^2 = 61$$

$$\Rightarrow g^2 + (2g + 4)^2 = 61$$

$$\Rightarrow 5g^2 + 16g - 45 = 0$$

$$\Rightarrow (5g - 9)(g + 5) = 0$$

$$\Rightarrow g = \frac{9}{5}, -5$$

$$\therefore g = -5, f = -6 \quad \therefore \text{centre } (5, 6)$$

$$\text{Length of chord} = 2\sqrt{R^2 - d^2}$$

$$= 2\sqrt{36 - 4^2} = 2\sqrt{20}$$

$$\therefore L^2 = 80$$

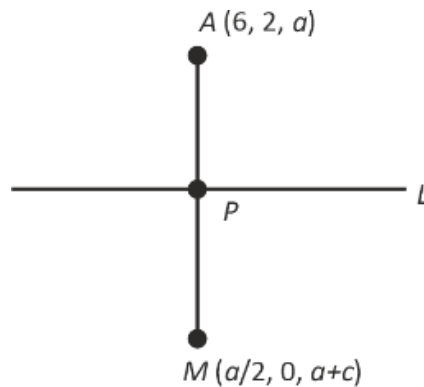
16. If the image of a point $A(6, 2, a)$ with respect to line L :

$$\frac{x}{1} = \frac{y-1}{2} = \frac{z-a+1}{b} \text{ is } \left(\frac{a}{2}, 0, a+c \right).$$

Then, the distance of the foot of perpendicular of A on line L from the point (a, b, c) is equal to

- (1) $2\sqrt{7}$ (2) $\sqrt{346}$
(3) $\sqrt{421}$ (4) $\sqrt{247}$

Answer (2)



Sol.

Our Problem Solvers shine bright in **JEE 2025**

JEE (Advanced)

ADVAY
MAYANK
AIR 36



RUJUL
GARG
AIR 41



ARUSH
ANAND
AIR 64



JEE (MAIN)

SHREYAS
LOHIYA
AIR 6
Uttar Pradesh Topper
100 Overall



KUSHAGRA
BAINGAHA
AIR 7
Uttar Pradesh Topper
100 Overall



HARSHH
A GUPTA
AIR 15
Telangana Topper
100 Overall



$$P(\lambda, 2\lambda + 1, b\lambda + a - 1)$$

$$\overline{AP} = (\lambda - 6, 2\lambda - 1, b\lambda - 1)$$

$$\overline{AP} \perp L$$

$$\Rightarrow (\lambda - 6)(1) + (2\lambda - 1)(2) + b(b\lambda - 1) = 0$$

$$\Rightarrow \lambda - 6 + 4\lambda - 2 + b^2\lambda - b = 0$$

$$\Rightarrow (5 + b^2)\lambda = 8 + b$$

$$\Rightarrow \lambda = \frac{8 + b}{5 + b^2} \dots (1)$$

$$M(2\lambda - 6, 4\lambda, 2b\lambda + a - 2)$$

$$2\lambda - 6 = \frac{a}{2}$$

$$4\lambda = 0 \text{ and } 2b\lambda + a - 2 = a + c$$

$$\Rightarrow \lambda = 0 \text{ and } a - 2 = a + c$$

$$c = -2$$

from (1)

$$b = -8$$

$$Q(a, b, c) = (-12, -8, -2)$$

$$P(0, 1, -13)$$

$$PQ = \sqrt{144 + 81 + 121} = \sqrt{346}$$

- 17.
- 18.
- 19.
- 20.

SECTION - B

Numerical Value Type Questions: This section contains 5 Numerical based questions. The answer to each question should be rounded-off to the nearest integer.

21. The value of $\lim_{x \rightarrow 0} \frac{x^2 \sin^2 x}{x^2 - \sin^2 x}$ is equal to

Answer (03)

Sol.
$$\lim_{x \rightarrow 0} \frac{x^2 \left(x - \frac{x^3}{3!} + \frac{x^5}{5!} + \dots \right)^2}{x^2 - \left(x - \frac{x^3}{3!} + \frac{x^5}{5!} + \dots \right)^2}$$

$$= \lim_{x \rightarrow 0} \frac{x^4 \left(1 - \frac{x^2}{3!} + \dots \right)}{x^2 - x^2 + 2 \cdot \frac{x^4}{3!} + \dots} = \frac{3!}{2} = 3$$

22. Let matrix $A = \begin{bmatrix} -1 & 1 & 1 \\ 1 & 0 & 1 \\ 0 & 0 & 1 \end{bmatrix}$. If $A^2 + \alpha(\text{adj}(\text{adj}(A))) +$

$$\beta \text{adj}(\text{adj}(\text{adj}(A))) = \begin{bmatrix} -4 & -4 & 0 \\ -4 & 0 & 2 \\ 0 & 0 & -2 \end{bmatrix}$$
 then $(\alpha + \beta)^2$ is

equal to

Answer (09.00)

Sol. $\text{adj}(A) = |A|(A^{-1})$

Here, $|A| = -1$

$$M_1 = \text{adj}(\text{adj}(A)) = |A|^{n-2}(A) = -A$$

$$M_2 = \text{adj}(\text{adj}(\text{adj}(A))) = |A|^{(n-2)(n-1)}(\text{adj}A) = (\text{adj}A)$$

$$\Rightarrow A^2 + \alpha M_1 + \beta M_2 = \begin{bmatrix} 4 & -4 & 0 \\ -4 & 0 & 2 \\ 0 & 0 & -2 \end{bmatrix}$$

$$\begin{bmatrix} 2 & -1 & 1 \\ -1 & 1 & 2 \\ 0 & 0 & 1 \end{bmatrix} + \alpha \begin{bmatrix} 1 & -1 & -1 \\ -1 & 0 & -1 \\ 0 & 0 & -1 \end{bmatrix} + \beta \begin{bmatrix} 0 & -1 & 1 \\ -1 & 1 & 2 \\ 0 & 0 & -1 \end{bmatrix} = \begin{bmatrix} 4 & -4 & 0 \\ -4 & 0 & 2 \\ 0 & 0 & -2 \end{bmatrix}$$

Comparing

$$\alpha = 2, \beta = 1$$

$$(\alpha + \beta)^2 = 9$$

- 23.
- 24.
- 25.



Our Problem *Solvers* shine bright in **JEE 2025**

JEE (Advanced)				JEE (MAIN)			
 ADVAY MAYANK AIR 36	 RUJUL GARG AIR 41	 ARUSH ANAND AIR 64	 SHREYAS LOHIYA AIR 6 Uttar Pradesh Topper 100 Overall	 KUSHAGRA BAINGAHA AIR 7 Uttar Pradesh Topper 100 Overall	 HARSSH A GUPTA AIR 15 Telangana Topper 100 Overall		